

# Mathematics

## Ages 5

## to 6

# Glen K. Dash

Today is my first day in School.



Today is my  
second year in  
School.



## Preface

After teaching High School for twenty two years, I decided to write books. I taught High School Mathematics, Additional Mathematics, Biology, Human and Social Biology, Physics, Integrated Science, Geography, SAT Mathematics, SAT Physics and MCAT Physics in the past and I am capable of teaching subjects in the Social Sciences and Business fields.

A few years ago, the new Elementary School Curriculum was introduced in my country and there was a sudden need for Mathematics books to reflect this. That was when I decided to get copies of the new Elementary School Curriculum and I started to write. The new Elementary School Curriculum is integrated in nature and because I have experience in teaching different subjects, I was able to integrate the lessons in this book.

This is the first in a series of seven books that will cover the new curriculum for year one to the final year leading up to examination. This book can be used globally, because the core content for Mathematics is the same internationally.

There are many activities designed for students regardless of their intelligence level. Many colorful diagrams, photos and illustrations are used in the book to attract the attention of students. I would encourage parents to print this book when it is downloaded and work through all the exercises with their children.

It is my intention to improve this book regularly so that Teachers, parents and students benefit fully.

If you are a Publisher and would like to get in contact with me to distribute paperback copies of this book globally, my e-mail address is [kishwardass@hotmail.com](mailto:kishwardass@hotmail.com).

# CONTENTS

## **NUMBER**

### **Pre number**

Groups	1
Same colour	1
Same size	2
Same shape	3
Same texture	4
Same names	5
Same shape with same colour	6
One to one correspondence: more than	7
One to one correspondence: equal to	8
As many as	9
Most and least	10
Count to 20 in ascending order	12
Count backwards from 20 to 0	13
Counting on from a given number	
From 10 to 20	14
From 5 to 20	15
From 13 to 20	16
From 8 to 20	16
Counting back from a given number	
From 10 back to 0	17
From 20 back to 5	18
From 20 back to 10	19
From 15 back to 0	20

### **Number concepts**

Zero	21
One	22
Two	24
Three	26
Four	28
Five	30
Six	32
Seven	34
Eight	36
Nine	38
Ten	40

Using 5 to make 6, 7, 8, 9 and 10	42
Money: coins	43
Equivalent coins	43
Money: dollars	45
Equivalent dollars	45
Buying fruits with coins	47
At the grocery with dollars	48
Ordinal numbers: first, second, third and last	49
<b>Number patterns</b>	50
Two elements pattern	53
Three elements pattern	55
<b>Addition</b>	
And	57
How many altogether	58
In all	59
Equals	60
Add	61
Plus	62
Total	63
Sum	64
+ and = signs	65
Addition with Zero	66
Adding vertically	67
Adding horizontally	69
Addition with money	71
Number stories	74
<b>Subtraction</b>	
Remove and remain	75
Take away	77
Leaves	79
Minus and equals	81
Subtract	83
- and = signs	85
Subtraction with zero	86
Subtracting vertically	87
Subtracting horizontally	89
Subtraction with money	91
Number stories	94

<b>Mental Mathematics</b>	
Using the number line	95
Groups of five for easier addition	98
<b>Vocabulary for numbers</b>	100
<b>GEOMETRY</b>	
Plane shapes	106
Properties of plane shapes	110
Models with plane shapes	111
Solids	113
Special names for solids	114
Properties of solids	117
Models with solids	119
2-D and 3-D shapes	122
Comparing plane shapes	124
Comparing solids	125
<b>Geometrical patterns</b>	
Patterns with plane shapes	126
2 shapes pattern	126
3 shapes pattern	127
Patterns with solids	
2 solids pattern	128
3 solids pattern	129
<b>Vocabulary for geometry</b>	130
<b>MEASUREMENT</b>	
Length	137
Long and short	139
Longer and shorter	140
Short and shorter	141
Long and longer	142
Tall and taller	143
As long as (same length)	144
Wide and narrow	145
Thin and fat	146
Deep and shallow	147
High and low	148
Near and far	149

<b>Mass</b>	
Light and heavy	150
Heavy and heavier	152
Light and lighter	153
Easy to push and hard to push	154
Easy to pull and hard to pull	155
<b>Weight</b>	
Same weight	156
Light and heavy, lighter and heavier	157
<b>Time</b>	
Day and night	158
Time of day-sequence of activities	159
Early and earlier	160
Late and later	161
Short time and long time	162
<b>Vocabulary for measurement</b>	163

## **STATISTICS**

Sorting and grouping	168
Count	168
Sort and group	169
Put them in a table	170
Object chart (horizontal with grids)	171
Object chart (vertical with grids)	172
Picture chart (horizontal with grids)	173
Picture chart (vertical with grids)	174
Object chart (horizontal without grids)	175
Object chart (vertical without grids)	176
Picture chart (horizontal without grids)	177
Picture chart (vertical without grids)	178
Activity	179
Activity	180
<b>Vocabulary for statistics</b>	181

# NUMBER

## Pre-Number



### Groups

<p>They are the same.</p> 	 <p>same</p>	<p>They are different.</p> 	 <p>different</p>
---	---	--	--













Circle the **same** colour.

## Same size



<p>They are the <b>same</b> size.</p> 	<p>They are <b>different</b> in size.</p> 
---	--

Circle the **same** size.





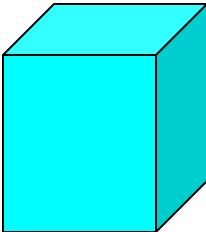

	  
	  
	  



## Same shape

<p>These have the <b>same</b> shape.</p> 	<p>These have <b>different</b> shapes.</p> 
--	---

Circle the **same** shape.



## Same texture









Circle the **hard** or **soft** ones.



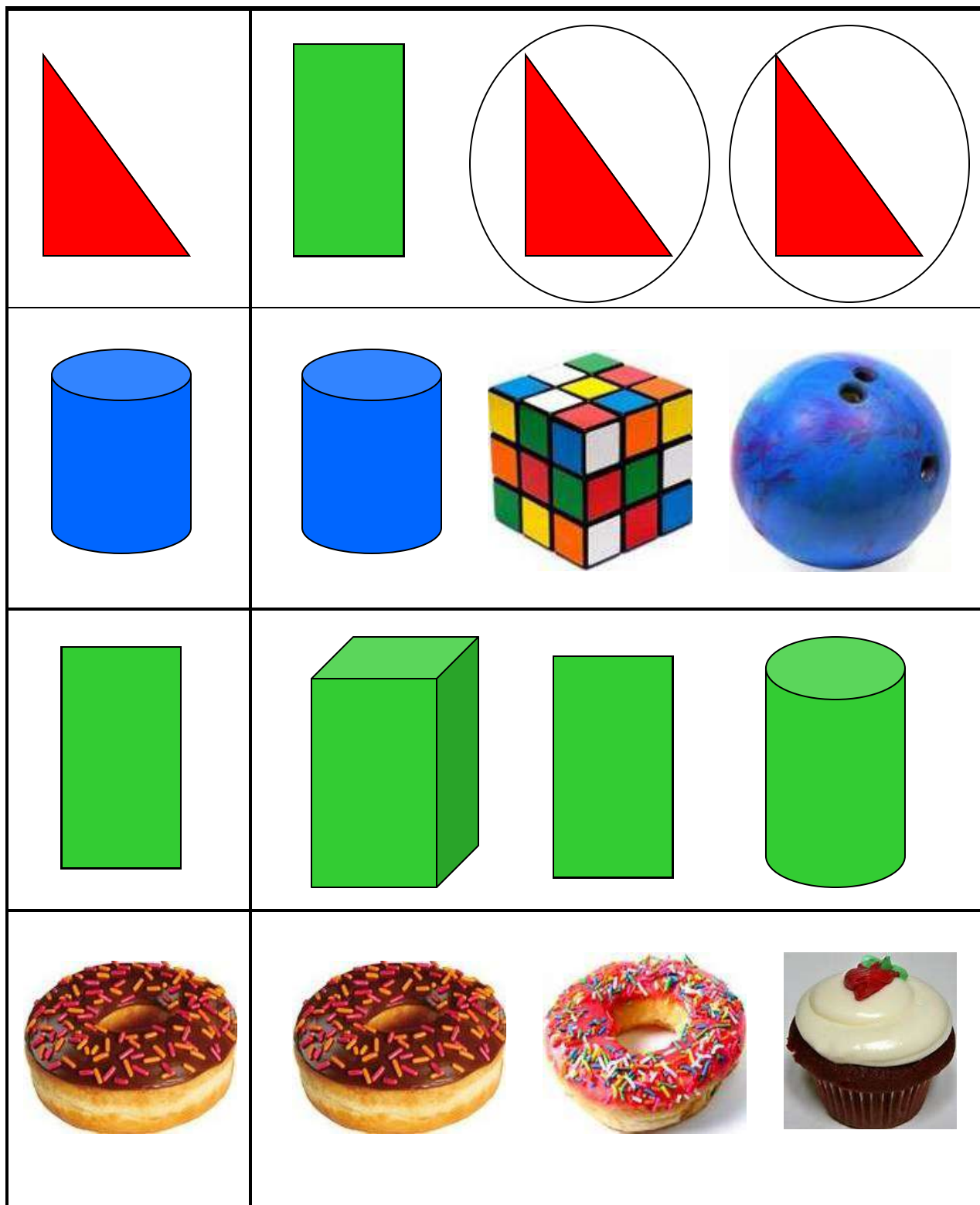
## Same names

<p>These have the <b>same</b> names.</p> 	<p>These have <b>different</b> names.</p> 
--	--

Circle the ones with the **same** names.

<p>fruit</p> 	
<p>ice cream</p> 	
<p>donut</p> 	

Same shape with same colour  
Circle the same shape which has the same colour



## One to one correspondence: more than

The diagram shows two groups of DVD discs. The left group has three discs, and the right group has two discs. Three arrows point from the left group to the right group, showing that each disc in the right group is paired with a disc in the left group, with one disc in the left group remaining unpaired. A boy's speech bubble says "I have more than Faith." and a girl's speech bubble says "I have less than Joel." Below the groups are boxes labeled "more than" and "less than".

I have more than Faith.

I have less than Joel.

more than

less than

Write **m** for more than and **l** for less than.

<p>1</p> <p>m</p>	<p></p> <p></p>
<p></p> <p></p>	<p></p> <p></p>

## One to one correspondence: equal to

They are equal.

They are equal.

equal to

equal to

Write **e** for equal to and **n** for not equal to.

<p>e</p> <p>e</p>	<p></p> <p></p>
<p></p> <p></p>	<p></p> <p></p>

## As many as means equal

<p>I have <b>as many as</b> Faith.</p>		<p>I have <b>as many as</b> Joel.</p>
	<p>as many as</p>	

Write **a** next to as many as.

<p>a</p>	<p>a</p>	<p></p>	<p></p>
<p></p>	<p></p>	<p></p>	<p></p>

## Most and least

I have **most**.

I have **least**.




most      least

Write **m** for most and **l** for least.







<p>m      l</p>	<p>      </p>
<p>      </p>	<p>      </p>



## Most and least

		
<input type="text"/>	<p>most</p>	<p>least</p>

Write **m** next to most and **l** next to least.

		
<input type="text"/>	<input type="text"/>	<input type="text"/>
		
<input type="text"/>	<input type="text"/>	<input type="text"/>

Count to 20 in ascending order

ACTIVITY: The teacher will use flashcards to help the students count.

<b>0</b>	<b>1</b>	<b>2</b>	<b>3</b>	<b>4</b>
<b>5</b>	<b>6</b>	<b>7</b>	<b>8</b>	<b>9</b>
<b>10</b>	<b>11</b>	<b>12</b>	<b>13</b>	<b>14</b>
<b>15</b>	<b>16</b>	<b>17</b>	<b>18</b>	<b>19</b>
<b>20</b>				

Count backwards from 20 to 0

ACTIVITY: The teacher will use flashcards to help the students count.

<b>20</b>	<b>19</b>	<b>18</b>	<b>17</b>	<b>16</b>
<b>15</b>	<b>14</b>	<b>13</b>	<b>12</b>	<b>11</b>
<b>10</b>	<b>9</b>	<b>8</b>	<b>7</b>	<b>6</b>
<b>5</b>	<b>4</b>	<b>3</b>	<b>2</b>	<b>1</b>
<b>0</b>				

## Counting on from a given number

Start from 10 and count on to 20.

ACTIVITY: The teacher will use flashcards to help the students count.

<b>10</b>	<b>11</b>	<b>12</b>	<b>13</b>	<b>14</b>
<b>15</b>	<b>16</b>	<b>17</b>	<b>18</b>	<b>19</b>
<b>20</b>				

Start from 5 and count on to 20.

ACTIVITY: The teacher will use flashcards to help the students count.

<b>5</b>	<b>6</b>	<b>7</b>	<b>8</b>	<b>9</b>
<b>10</b>	<b>11</b>	<b>12</b>	<b>13</b>	<b>14</b>
<b>15</b>	<b>16</b>	<b>17</b>	<b>18</b>	<b>19</b>
<b>20</b>				

Start from 13 and count on to 20.

<b>13</b>	<b>14</b>	<b>15</b>	<b>16</b>	<b>17</b>
<b>18</b>	<b>19</b>	<b>20</b>		

Start from 8 and count on to 20.

<b>8</b>	<b>9</b>	<b>10</b>	<b>11</b>	<b>12</b>
<b>13</b>	<b>14</b>	<b>15</b>	<b>16</b>	<b>17</b>
<b>18</b>	<b>19</b>	<b>20</b>		

## Counting back from a given number

Start from 10 and count back to 0.

ACTIVITY: The teacher will use flashcards to help the students count.

<b>10</b>	<b>9</b>	<b>8</b>	<b>7</b>	<b>6</b>
<b>5</b>	<b>4</b>	<b>3</b>	<b>2</b>	<b>1</b>
<b>0</b>				

Start from 20 and count back to 5.

ACTIVITY: The teacher will use flashcards to help the students count.

<b>20</b>	<b>19</b>	<b>18</b>	<b>17</b>	<b>16</b>
<b>15</b>	<b>14</b>	<b>13</b>	<b>12</b>	<b>11</b>
<b>10</b>	<b>9</b>	<b>8</b>	<b>7</b>	<b>6</b>
<b>5</b>				



Start from 20 and count back to 10.

ACTIVITY: The teacher will use flashcards to help the students count.

<b>20</b>	<b>19</b>	<b>18</b>	<b>17</b>	<b>16</b>
<b>15</b>	<b>14</b>	<b>13</b>	<b>12</b>	<b>11</b>
<b>10</b>				





Start from 15 and count back to 0.

ACTIVITY: The teacher will use flashcards to help the students count.

<b>15</b>	<b>14</b>	<b>13</b>	<b>12</b>	<b>11</b>
<b>10</b>	<b>9</b>	<b>8</b>	<b>7</b>	<b>6</b>
<b>5</b>	<b>4</b>	<b>3</b>	<b>2</b>	<b>1</b>
<b>0</b>				

# NUMBER CONCEPTS







## 0 Zero

<p>I just ate my last </p>	<p>Mummy just used the last </p>
 <p>Now I have <b>none</b>. We say <b>zero</b>.</p>	 <p>Now she has <b>none</b>. We say <b>zero</b>.</p>

Trace and write.

0	0	0	0	0	0
<b>0</b>					
zero					

Write 0 next to the sets with zero.

1 one  
Joel goes to School

1 family Today is my first day in School one family

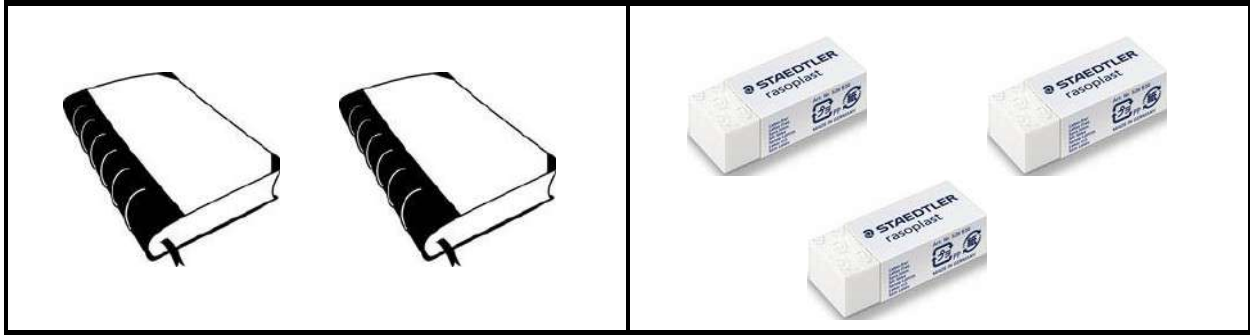
Joel Faith daddy mummy

1 school one school 1 teacher one teacher


Trace and write.

1	1	1	1	1	1
<b>1</b>					
one					


Circle 1 object.



Circle the sets with 1.



Write one and 1.



2 two

Joel and mummy go to the bookstore.

2 islands

two islands



2 water taxis



two water taxis

2 towers

two towers



2 flags

two flags



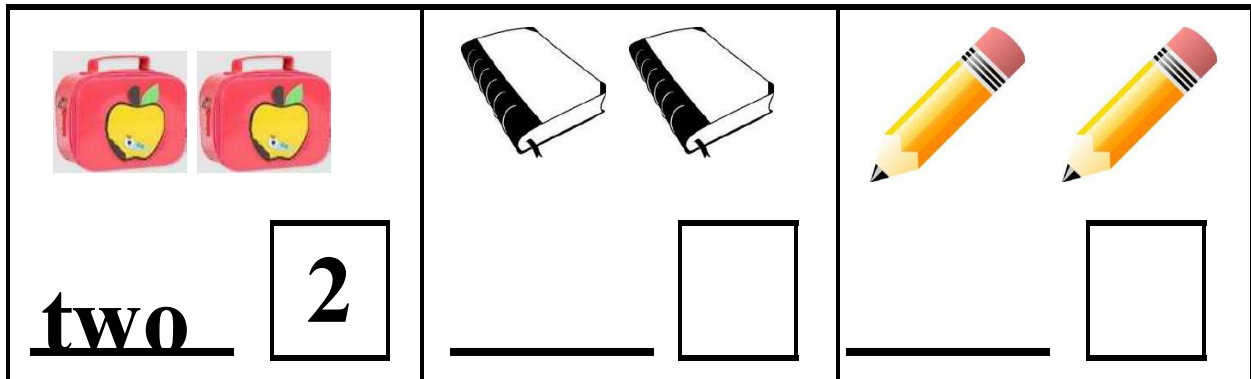
Trace and write.

2	2	2	2	2	2
<b>2</b>					
two					


Circle the sets with 2.



Write two and 2.







Draw lines from 2 to the correct sets.



3 three



Joel and his class go to the garden at school.

3 tomatoes    three tomatoes	3 carrots    three carrots
	
3 bananas    three bananas	3 cabbages    three cabbages
	

Trace and write.


3	3	3	3	3	3
<b>3</b>					
three					

Circle 3 vegetables in each set.


	
---	--




Circle the sets with 3.











Write three and 3 in the correct box.



Draw lines from 3 to the correct sets.





4 four  
Joel and his family go to the zoo.

4 people 	four people 	4 buses 	four buses 
4 lions 	four lions 	4 tigers 	four tigers 


Trace and write.

4	4	4	4	4	4
4					
four					


Circle 4 animals in each set.

	
---	--

Colour 4 in each set.



Write four and 4 next to the correct sets.



Draw lines from 4 to the correct sets.



5 five  
Happy birthday Joel.

5 years 		five years 	5 friends 	five friends
5 presents 	five presents	5 donuts 	five donuts	

Trace and write.

5	5	5	5	5	5
<b>5</b>					
five					

Circle 5 in each set.

	
---	--

Circle the sets with 5.







Draw lines from 5 to the correct sets.



6 six


Joel and his daddy go to the flower shop.

<p>6 roses</p> 	<p>six roses</p> <p>6 plants</p> 
<p>6 petals</p> 	<p>six petals</p> <p>6 tools</p> 


Trace and write.

6					
6					
six					

Circle 6 in each set.

	
---	--

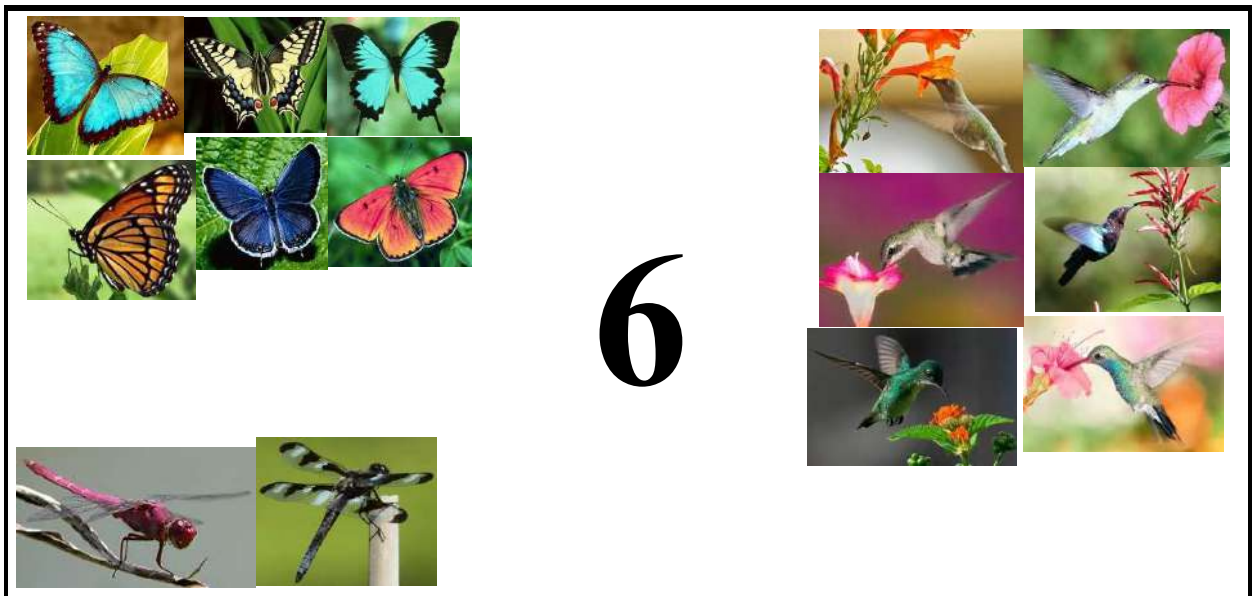
Colour 6 leaves.



Circle the set with 6.



Draw lines from 6 to the correct sets.



7 seven



Joel, Faith and daddy go to the computer store.

<p>7 laptops      seven laptops</p> 	<p>7 printers      seven printers</p> 
<p>7 mouse      seven mouse</p> 	<p>7 tablets      seven tablets</p> 

Trace and write.





7	7	7	7	7	7
7					
seven					

Colour 7 in each set.

	
---	--



Write seven and 7 next to the correct set.

 <p><b>seven</b></p>	 <p style="text-align: center; border: 1px solid black; width: 40px; height: 40px; margin: 0 auto;"> </p>
 <p style="text-align: center; border: 1px solid black; width: 40px; height: 40px; margin: 0 auto;"> </p>	 <p style="text-align: center; border: 1px solid black; width: 40px; height: 40px; margin: 0 auto;"> </p>

Draw lines from 7 to the correct sets.

	
	<p style="text-align: center; font-size: 48px; font-weight: bold;">7</p> 

# 8 eight Merry Christmas

8 reindeers    eight reindeers



8 presents    eight presents




8 elves



eight elves

8 stars



eight stars







Trace and write.

8	8	8	8	8	8
<b>8</b>					
eight					

Circle 8 objects.



Write eight and 8 next to the correct sets.

 <p>eight <span style="border: 1px solid black; padding: 2px 10px;">8</span></p>	 <p>_____ <span style="border: 1px solid black; padding: 2px 10px;">  </span></p>	 <p>_____ <span style="border: 1px solid black; padding: 2px 10px;">  </span></p>
 <p>_____ <span style="border: 1px solid black; padding: 2px 10px;">  </span></p>	 <p>_____ <span style="border: 1px solid black; padding: 2px 10px;">  </span></p>	 <p>_____ <span style="border: 1px solid black; padding: 2px 10px;">  </span></p>

Draw lines from 8 to the correct sets.

 	<h1>8</h1>  
---	---

9 nine

Joel, Faith, mummy and daddy go to the grocery.

<p>9 baskets      nine baskets</p> 	<p>9 trolleys      nine trolleys</p> 
<p>9 bags of sugar</p>  <p>nine bags of sugar</p>	<p>9 oranges      nine oranges</p> 

Trace and write.

9	9	9	9	9	9
9					
nine					

Help mummy get 9 smaltas. Circle 9 smaltas.











Circle 9 items in each group for mummy.



Draw lines from 9 to the correct sets.




10 ten  
Joel's grandfather has a farm.

<p>10 cows</p> 	<p>ten cows</p> 	<p>10 horses</p> 	<p>ten horses</p> 
<p>10 chickens</p> 	<p>ten chickens</p> 	<p>10 ducks</p> 	<p>ten ducks</p> 





Trace and write.

10	10	10	10	10	10
<b>10</b>					
ten					









Circle 10 ducklings.















Write ten and 10 next to the correct sets.

 <input data-bbox="630 525 750 663" type="checkbox"/>	 <input data-bbox="1250 535 1370 674" type="checkbox"/>
 <input data-bbox="620 907 740 1045" type="checkbox"/>	 <input data-bbox="1263 934 1383 1073" type="checkbox"/>

Circle the groups with 10.




		
		
		

## Using 5 to make 6, 7, 8, 9 and 10

<p>I have 5.</p>   <p>= 5</p>	<p>I have one more than 5.</p>   <p>= 6</p>
<p>I have two more than 5.</p>   <p>= 7</p>	<p>I have three more than 5.</p>   <p>= 8</p>
<p>I have four more than 5.</p>   <p>= 9</p>	<p>I have five more than 5.</p>   <p>= 10</p>







## Money: coins





								
<table border="1" style="width: 100%; text-align: center;"> <tr><td>1 cent</td></tr> <tr><td>1 ¢</td></tr> </table>	1 cent	1 ¢	<table border="1" style="width: 100%; text-align: center;"> <tr><td>5 cents</td></tr> <tr><td>5 ¢</td></tr> </table>	5 cents	5 ¢	<table border="1" style="width: 100%; text-align: center;"> <tr><td>10 cents</td></tr> <tr><td>10 ¢</td></tr> </table>	10 cents	10 ¢
1 cent								
1 ¢								
5 cents								
5 ¢								
10 cents								
10 ¢								

## Equivalent coins

Coins	The same as
	
	

Coins	The same as
	
	

Circle the same as (same value).







	
	

# Money: dollars





<table border="1"> <tr> <td>1 dollar</td> </tr> <tr> <td>\$ 1</td> </tr> </table>	1 dollar	\$ 1	<table border="1"> <tr> <td>5 dollars</td> </tr> <tr> <td>\$ 5</td> </tr> </table>	5 dollars	\$ 5	<table border="1"> <tr> <td>10 dollars</td> </tr> <tr> <td>\$ 10</td> </tr> </table>	10 dollars	\$ 10
1 dollar								
\$ 1								
5 dollars								
\$ 5								
10 dollars								
\$ 10								

# Equivalent dollars







Dollars	The same as

Dollars	The same as
	
	
	

## Buying fruits

			
apple 5 ¢	banana 2 ¢	mango 2 ¢	orange 2 ¢


Write the cost in the box and circle the money.

 <input type="text"/> ¢	
 <input type="text"/> ¢	
 <input type="text"/> ¢	

# At the grocery

			
smalta \$2	milk \$2	butter \$2	bread \$5

Write the cost in the box and circle the money.

 <div style="border: 1px solid black; width: 100px; height: 50px; margin: 10px auto; text-align: center; font-size: 2em;">\$</div>	
 <div style="border: 1px solid black; width: 100px; height: 50px; margin: 10px auto; text-align: center; font-size: 2em;">\$</div>	
 <div style="border: 1px solid black; width: 100px; height: 50px; margin: 10px auto; text-align: center; font-size: 2em;">\$</div>	

## Ordinal Numbers

### First, second, third and last



third second first



third second first



<b>Joe</b>	<b>Jane</b>	<b>Tom</b>	<b>Mary</b>
first	second	third	last

1. Joe is first.
2. Jane is second.
3. Tom is third.
4. Mary is last.



<b>Ale</b>	<b>Arlena</b>	<b>Joel</b>	<b>Faith</b>
first	second	third	last

1. Who is first? \_\_\_\_\_
2. Who is second?  
\_\_\_\_\_
3. Who is third?  
\_\_\_\_\_
4. Who is last?  
\_\_\_\_\_

## Number Patterns

These are number patterns.

**1, 2, 3, 4, 5, 6, 7,  
8, 9, 10**

Add 1 to get the next number.




**2, 4, 6, 8, 10**

Add 2 to get the next number.




**3, 6, 9**

Add 3 to get the next number.



**4, 8**

Add 4 to get the next number.





Circle and write the 2 missing numbers.

<b>2, 3, _____, _____, 6</b>	<b>4, 5</b> <b>4, 6</b>
<b>3, _____, _____</b>	<b>7, 8</b> <b>6, 9</b>
<b>2, _____, _____, 8</b>	<b>4, 6</b> <b>3, 4</b>
<b>5, _____, _____, 8, 9</b>	<b>6, 7</b> <b>7, 8</b>

Circle and write the next 2 numbers.

<b>1, 2, 3, 4, _____, _____</b>	<b>3, 4</b>
	<b>5, 6</b>
<b>4, 5, 6, 7, _____, _____</b>	<b>8, 9</b>
	<b>7, 8</b>
<b>1, 3, 5, _____, _____</b>	<b>7, 9</b>
	<b>6, 7</b>
<b>2, 4, _____, _____</b>	<b>6, 8</b>
	<b>5, 6</b>


## Two elements pattern

1, 2, 1, 2, 1, 2


These are the next two numbers in the pattern.

3, 4, 3, 4, 3, 4

These are the next two numbers in the pattern.



These are the next dots in the pattern.



These are the next objects in the pattern.

Circle the next 2 in each.

3, 2, 3, 2, \_\_, \_\_



3, 2

3, 4

3, 3, 4, 4, \_\_, \_\_

5, 5

5, 6



## Three elements pattern

**1, 2, 3, 1, 2, 3**


These are the next 3 numbers in the pattern.

**1, 1, 1, 2, 2, 2**

These are the next 3 numbers in the pattern.






These are the next 3 objects in the pattern.





These are the next fruits in the pattern.

Circle the missing ones.



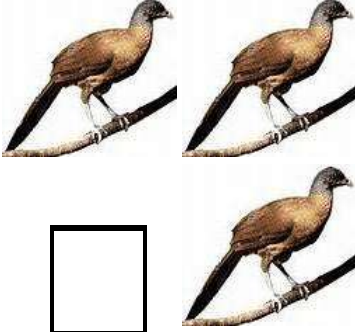
2, 3, 4, __, __, __						3, 4, 5																	
						2, 3, 4																	
1, 2, 1, __, __, __						1, 2, 1																	
						2, 3, 4																	
<table border="1"> <tbody> <tr> <td>●</td> <td>● ● ●</td> <td>● ●</td> <td></td> <td></td> <td></td> <td>●</td> <td>● ● ● ● ● ●</td> <td>● ●</td> </tr> <tr> <td></td> <td></td> <td></td> <td></td> <td></td> <td></td> <td>● ●</td> <td>● ● ● ● ● ●</td> <td>● ● ● ●</td> </tr> </tbody> </table>						●	● ● ●	● ●				●	● ● ● ● ● ●	● ●							● ●	● ● ● ● ● ●	● ● ● ●
●	● ● ●	● ●				●	● ● ● ● ● ●	● ●															
						● ●	● ● ● ● ● ●	● ● ● ●															
																							
																							

Addition: and







and  is




Write the numbers in the boxes.

and  is






and  is






and  is


How many altogether




and  is  altogether




Write the numbers in the boxes.



and  is  altogether




and  is  altogether



and  is  altogether




In all




**3** and **3** is **6** in all


Write the numbers in the boxes.



and  is  in all



and  is  in all



and  is  in all

## Equals

5 and 3 equals 8


Write the numbers in the boxes.

and  equals

and  equals

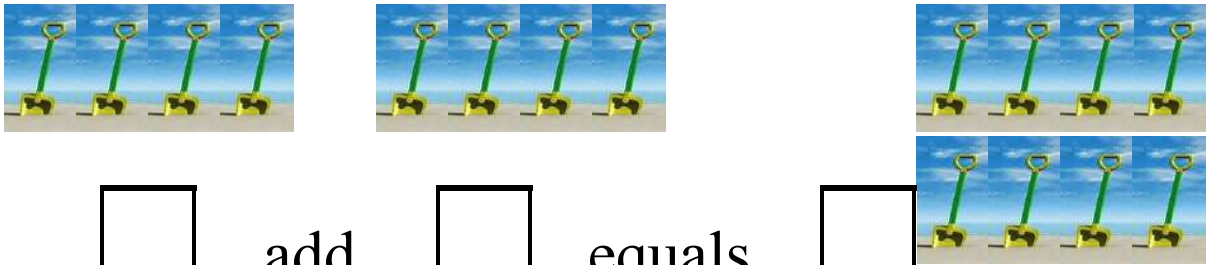
and  equals

Add




**3** add **7** equals **10**


Write the numbers in the boxes.



add  equals



add  equals



add  equals

Plus

4 plus 3 equals 7

Write the numbers in the boxes.

plus  equals

plus  equals

plus  equals

Total

2 plus 5 equals 7 TOTAL

Write the numbers in the boxes.

plus  equals  TOTAL

plus  equals  TOTAL


plus  equals  TOTAL

## Sum

Find the sum of 3 and 4.



I have 3  
apples  
and 4  
apples.



1, 2, 3, 4, 5, 6, 7



The sum of

**5**




and

**3**

is

**8**

Write the numbers in the boxes.



The sum of

and

is




The sum of

and


is

+ and = signs




**4 plus 3 equals 7**


Complete the boxes.



**3 plus 2 equals 5**






**2 plus 3 equals 5**












**3 plus 3 equals 6**

## Addition with Zero

				
<b>zero</b>	<b>add</b>	<b>4</b>	<b>equals</b>	<b>4</b>
<input type="text" value="0"/>	<input type="text" value="+"/>	<input type="text" value="4"/>	<input "="" type="text" value="="/>	<input type="text" value="4"/>

Complete the boxes.

				
<b>6</b>	<b>add</b>	<b>zero</b>	<b>equals</b>	<b>6</b>
<input type="text"/>	<input type="text"/>	<input type="text"/>	<input type="text"/>	<input type="text"/>
				
<b>zero</b>	<b>add</b>	<b>3</b>	<b>equals</b>	<b>3</b>
<input type="text"/>	<input type="text"/>	<input type="text"/>	<input type="text"/>	<input type="text"/>
				
<b>2</b>	<b>add</b>	<b>0</b>	<b>equals</b>	<b>2</b>
<input type="text"/>	<input type="text"/>	<input type="text"/>	<input type="text"/>	<input type="text"/>



## Adding vertically

We can do this with marbles or dots.


$$\begin{array}{r} 2 \\ + 3 \\ \hline \\ \hline \end{array}$$

●●

●●●

●●●●●

2 plus 3 equals 5.



Use dots or marbles to do these.

$\begin{array}{r} 3 \\ + 7 \\ \hline \\ \hline \end{array}$ <div style="display: flex; margin-top: 5px;"> <div style="border: 1px solid black; width: 100px; height: 25px; margin-right: 5px;"></div> <div style="border: 1px solid black; width: 100px; height: 25px; margin-right: 5px;"></div> <div style="border: 1px solid black; width: 100px; height: 25px;"></div> </div>	$\begin{array}{r} 2 \\ + 8 \\ \hline \\ \hline \end{array}$ <div style="display: flex; margin-top: 5px;"> <div style="border: 1px solid black; width: 100px; height: 25px; margin-right: 5px;"></div> <div style="border: 1px solid black; width: 100px; height: 25px; margin-right: 5px;"></div> <div style="border: 1px solid black; width: 100px; height: 25px;"></div> </div>
$\begin{array}{r} 8 \\ + 2 \\ \hline \\ \hline \end{array}$ <div style="display: flex; margin-top: 5px;"> <div style="border: 1px solid black; width: 100px; height: 25px; margin-right: 5px;"></div> <div style="border: 1px solid black; width: 100px; height: 25px; margin-right: 5px;"></div> <div style="border: 1px solid black; width: 100px; height: 25px;"></div> </div>	$\begin{array}{r} 0 \\ + 8 \\ \hline \\ \hline \end{array}$ <div style="display: flex; margin-top: 5px;"> <div style="border: 1px solid black; width: 100px; height: 25px; margin-right: 5px;"></div> <div style="border: 1px solid black; padding: 2px; width: 100px; height: 20px; margin-right: 5px;">●●●●●●●●</div> <div style="border: 1px solid black; padding: 2px; width: 100px; height: 20px;">●●●●●●●●</div> </div>
$\begin{array}{r} 5 \\ + 0 \\ \hline \\ \hline \end{array}$ <div style="display: flex; margin-top: 5px;"> <div style="border: 1px solid black; width: 100px; height: 25px; margin-right: 5px;"></div> <div style="border: 1px solid black; width: 100px; height: 25px; margin-right: 5px;"></div> <div style="border: 1px solid black; width: 100px; height: 25px;"></div> </div>	$\begin{array}{r} 9 \\ + 0 \\ \hline \\ \hline \end{array}$ <div style="display: flex; margin-top: 5px;"> <div style="border: 1px solid black; width: 100px; height: 25px; margin-right: 5px;"></div> <div style="border: 1px solid black; width: 100px; height: 25px; margin-right: 5px;"></div> <div style="border: 1px solid black; width: 100px; height: 25px;"></div> </div>

$$\begin{array}{r} 1 \\ + 9 \\ \hline \end{array}$$

$$\begin{array}{r} 6 \\ + 4 \\ \hline \end{array}$$

$$\begin{array}{r} 3 \\ + 7 \\ \hline \end{array}$$

$$\begin{array}{r} 2 \\ + 8 \\ \hline \end{array}$$

$$\begin{array}{r} 7 \\ + 3 \\ \hline \end{array}$$

$$\begin{array}{r} 5 \\ + 5 \\ \hline \end{array}$$

$$\begin{array}{r} 5 \\ + 2 \\ \hline \end{array}$$

$$\begin{array}{r} 10 \\ + 0 \\ \hline \end{array}$$


## Adding horizontally

We can do this with marbles or dots.

2 + 3 = 5

••      •••

2 plus 3 equals 5.



Use dots or marbles to do these.

3 + 4 = <input type="text"/>	4 + 3 = <input type="text"/>
5 + 5 = <input type="text"/>	0 + 9 = <input type="text"/>
4 + 5 = <input type="text"/>	7 + 2 = <input type="text"/>

$8 + 0 = \square$

$6 + 4 = \square$

$5 + 2 = \square$

$5 + 4 = \square$

$9 + 1 = \square$





$8 + 0 = \square$

$10 + 0 = \square$







$1 + 7 = \square$

## Addition with money



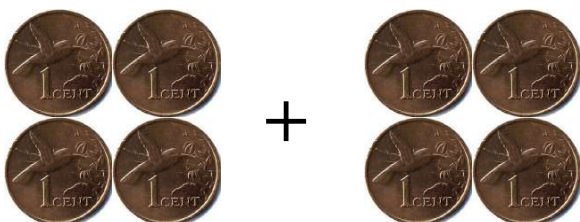

Complete the boxes.

 <div style="display: flex; justify-content: space-around; margin-top: 20px;"> <div style="border: 1px solid black; padding: 5px; width: 40px; text-align: center;">9 ¢</div> <div style="border: 1px solid black; padding: 5px; width: 100px; text-align: center;">9 cents</div> </div>	 <div style="display: flex; justify-content: space-around; margin-top: 20px;"> <div style="border: 1px solid black; padding: 5px; width: 40px; text-align: center;">10 ¢</div> <div style="border: 1px solid black; padding: 5px; width: 100px; text-align: center;">10 cents</div> </div>
 <div style="display: flex; justify-content: space-around; margin-top: 20px;"> <div style="border: 1px solid black; padding: 5px; width: 40px; text-align: center;">\$8</div> <div style="border: 1px solid black; padding: 5px; width: 100px; text-align: center;">8 dollars</div> </div>	 <div style="display: flex; justify-content: space-around; margin-top: 20px;"> <div style="border: 1px solid black; padding: 5px; width: 40px; text-align: center;">\$10</div> <div style="border: 1px solid black; padding: 5px; width: 100px; text-align: center;">10 dollars</div> </div>













Add these

 = <div style="border: 1px solid black; padding: 5px; display: inline-block;">6 ¢</div> <div style="border: 1px solid black; padding: 5px; width: 100px; text-align: center; margin-left: 100px;">6 cents</div> <p>1 cent add 5 cents is 6 cents</p>	 = <div style="border: 1px solid black; padding: 5px; display: inline-block;">8 ¢</div> <div style="border: 1px solid black; padding: 5px; width: 100px; text-align: center; margin-left: 100px;">8 cents</div>
 +  <div style="display: flex; justify-content: space-around; margin-top: 20px;"> <div style="border: 1px solid black; padding: 5px; width: 40px; text-align: center;">\$2</div> <div style="border: 1px solid black; padding: 5px; width: 100px; text-align: center;">2 dollars</div> </div>	 +  <div style="display: flex; justify-content: space-around; margin-top: 20px;"> <div style="border: 1px solid black; padding: 5px; width: 40px; text-align: center;">\$7</div> <div style="border: 1px solid black; padding: 5px; width: 100px; text-align: center;">7 dollars</div> </div>

Complete the boxes.

 <div style="display: flex; justify-content: space-around; align-items: center;"> <div style="text-align: center;"> <div style="border: 1px solid black; width: 40px; height: 40px; display: flex; align-items: center; justify-content: center;">¢</div> <div style="border: 1px solid black; width: 40px; height: 40px; display: flex; align-items: center; justify-content: center;"></div> </div> <div style="text-align: center;"> <div style="border: 1px solid black; width: 40px; height: 40px; display: flex; align-items: center; justify-content: center;">¢</div> </div> <div style="text-align: center;"> <div style="border: 1px solid black; width: 40px; height: 40px; display: flex; align-items: center; justify-content: center;"></div> <div style="border: 1px solid black; width: 40px; height: 40px; display: flex; align-items: center; justify-content: center;">¢</div> <div style="border: 1px solid black; width: 40px; height: 40px; display: flex; align-items: center; justify-content: center;">cents</div> </div> </div>
 <div style="display: flex; justify-content: space-around; align-items: center;"> <div style="text-align: center;"> <div style="border: 1px solid black; width: 40px; height: 40px; display: flex; align-items: center; justify-content: center;">¢</div> <div style="border: 1px solid black; width: 40px; height: 40px; display: flex; align-items: center; justify-content: center;"></div> </div> <div style="text-align: center;"> <div style="border: 1px solid black; width: 40px; height: 40px; display: flex; align-items: center; justify-content: center;">¢</div> <div style="border: 1px solid black; width: 40px; height: 40px; display: flex; align-items: center; justify-content: center;"></div> </div> <div style="text-align: center;"> <div style="border: 1px solid black; width: 40px; height: 40px; display: flex; align-items: center; justify-content: center;">¢</div> <div style="border: 1px solid black; width: 40px; height: 40px; display: flex; align-items: center; justify-content: center;">cents</div> </div> </div>
 <div style="display: flex; justify-content: space-around; align-items: center;"> <div style="text-align: center;"> <div style="border: 1px solid black; width: 40px; height: 40px; display: flex; align-items: center; justify-content: center;">¢</div> <div style="border: 1px solid black; width: 40px; height: 40px; display: flex; align-items: center; justify-content: center;"></div> </div> <div style="text-align: center;"> <div style="border: 1px solid black; width: 40px; height: 40px; display: flex; align-items: center; justify-content: center;">¢</div> <div style="border: 1px solid black; width: 40px; height: 40px; display: flex; align-items: center; justify-content: center;"></div> </div> <div style="text-align: center;"> <div style="border: 1px solid black; width: 40px; height: 40px; display: flex; align-items: center; justify-content: center;">¢</div> <div style="border: 1px solid black; width: 40px; height: 40px; display: flex; align-items: center; justify-content: center;">cents</div> </div> </div>
 <div style="display: flex; justify-content: space-around; align-items: center;"> <div style="text-align: center;"> <div style="border: 1px solid black; width: 40px; height: 40px; display: flex; align-items: center; justify-content: center;">¢</div> <div style="border: 1px solid black; width: 40px; height: 40px; display: flex; align-items: center; justify-content: center;"></div> </div> <div style="text-align: center;"> <div style="border: 1px solid black; width: 40px; height: 40px; display: flex; align-items: center; justify-content: center;">¢</div> <div style="border: 1px solid black; width: 40px; height: 40px; display: flex; align-items: center; justify-content: center;"></div> </div> <div style="text-align: center;"> <div style="border: 1px solid black; width: 40px; height: 40px; display: flex; align-items: center; justify-content: center;">¢</div> <div style="border: 1px solid black; width: 40px; height: 40px; display: flex; align-items: center; justify-content: center;">cents</div> </div> </div>


Complete the boxes.

 	+	 	=	\$	dollars
<div style="display: flex; justify-content: space-around; width: 100%;"> <span style="border: 1px solid black; padding: 5px;">\$</span> <span style="border: 1px solid black; width: 40px; height: 40px;"></span> <span style="border: 1px solid black; padding: 5px;">\$</span> <span style="border: 1px solid black; width: 40px; height: 40px;"></span> <span style="border: 1px solid black; padding: 5px;">\$</span> </div>	dollars				
 	+	 	=	\$	dollars
<div style="display: flex; justify-content: space-around; width: 100%;"> <span style="border: 1px solid black; padding: 5px;">\$</span> <span style="border: 1px solid black; width: 40px; height: 40px;"></span> <span style="border: 1px solid black; padding: 5px;">\$</span> <span style="border: 1px solid black; width: 40px; height: 40px;"></span> <span style="border: 1px solid black; padding: 5px;">\$</span> </div>	dollars				
	+		=	\$	dollars
<div style="display: flex; justify-content: space-around; width: 100%;"> <span style="border: 1px solid black; padding: 5px;">\$</span> <span style="border: 1px solid black; width: 40px; height: 40px;"></span> <span style="border: 1px solid black; padding: 5px;">\$</span> <span style="border: 1px solid black; width: 40px; height: 40px;"></span> <span style="border: 1px solid black; padding: 5px;">\$</span> </div>	dollars				
	+		=	\$	dollars
<div style="display: flex; justify-content: space-around; width: 100%;"> <span style="border: 1px solid black; padding: 5px;">\$</span> <span style="border: 1px solid black; width: 40px; height: 40px;"></span> <span style="border: 1px solid black; padding: 5px;">\$</span> <span style="border: 1px solid black; width: 40px; height: 40px;"></span> <span style="border: 1px solid black; padding: 5px;">\$</span> </div>	dollars				

## Number stories

At the zoo

Our zoo had no giraffe.  
Last year two giraffes came.  
Now we have \_\_\_\_\_ giraffes.



At the farm

Joel collected four eggs.  
Faith collected five eggs.  
They have a **total** of \_\_\_\_\_ eggs.



Money

Mummy gave Joel three dollars.  
Daddy gave Faith three dollars.  
They both have \_\_\_\_\_ dollars  
**in all.**




Christmas

Joel got four gifts.  
Faith got four gifts.  
They have equal number of gifts.





## Subtraction: remove and remain

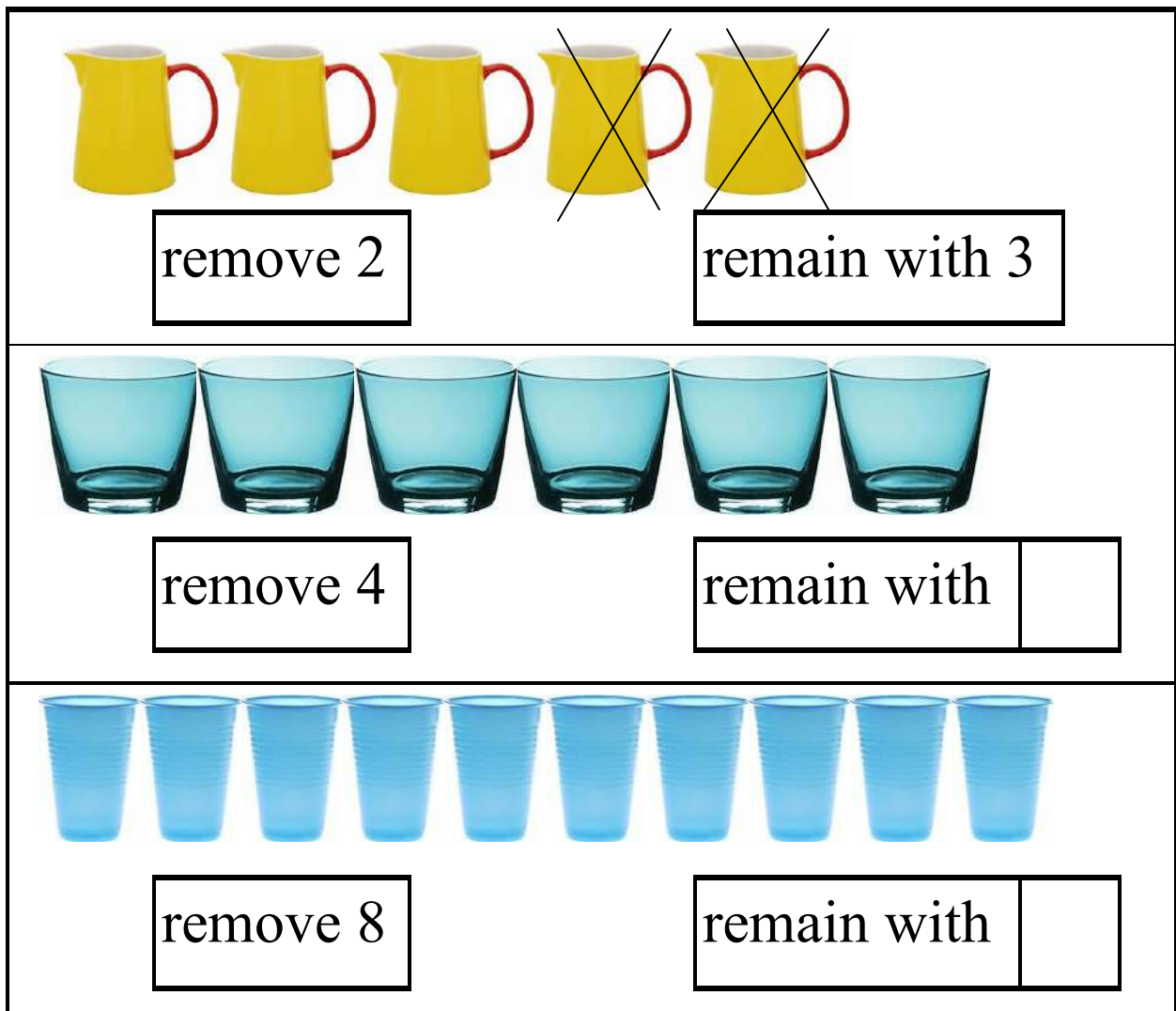


I have 4 bowls.

I remove 1 bowl.

I remain with 3 bowls.

Write the number in the boxes.



remove 2

remain with 3

remove 4

remain with

remove 8

remain with

Write the number in the boxes



remove 4

remain with



remove 7

remain with



remove 3


remain with



remove 4


remain with

Take away




**2** take away **1** is **1**


Write the numbers in the boxes.



**3** take away **2** is




**5** take away **3** is



**6** take away **2** is

Take away



**5** take away **3** is



**9** take away **5** is




**7** take away **2** is




**9** take away **4** is

## Leaves




take away  leaves


Write the numbers in the boxes.



take away  leaves







take away  leaves




take away  leaves

## Leaves

Write the numbers in the boxes.



<input type="text"/> take away <input type="text"/> leaves <input type="text"/>

<input type="text"/> take away <input type="text"/> leaves <input type="text"/>

<input type="text"/> take away <input type="text"/> leaves <input type="text"/>

<input type="text"/> take away <input type="text"/> leaves <input type="text"/>

## Minus and equals




**10** minus **7** equals **3**


Write the numbers in the boxes.



minus  equals



minus  equals



minus  equals

## Minus and equals




minus

equals




minus

equals




minus

equals





minus

equals




## Subtract




7 subtract 5 equals 2


Write the numbers in the boxes.



subtract  equals













subtract  equals




subtract  equals

## Subtract

Write the numbers in the boxes.


		
<input data-bbox="272 611 381 720" type="text"/>	subtract	<input data-bbox="784 611 893 720" type="text"/>
		
<input data-bbox="272 1003 381 1113" type="text"/>	subtract	<input data-bbox="784 1003 893 1113" type="text"/>
		
<input data-bbox="272 1381 381 1491" type="text"/>	subtract	<input data-bbox="784 1381 893 1491" type="text"/>
		
<input data-bbox="272 1780 381 1890" type="text"/>	subtract	<input data-bbox="784 1780 893 1890" type="text"/>
		
<input data-bbox="272 1780 381 1890" type="text"/>	subtract	<input data-bbox="784 1780 893 1890" type="text"/>

- and = signs




**7 minus 3 equals 4**


Complete the boxes.



**5 minus 2 equals 3**






**5 minus 3 equals 2**



**6 minus 3 equals 3**

Subtraction with Zero: complete the boxes.



**4 minus 0 equals 4**


**4**

**-**

**0**

**=**

**4**



**6 minus 6 equals 0**

**□**

**□**

**□**

**□**

**□**



**3 minus 0 equals 3**

**□**

**□**

**□**

**□**

**□**



**2 minus 2 equals 0**

**□**

**□**


**□**

**□**

**□**

## Subtracting vertically

We can do this with marbles or dots.

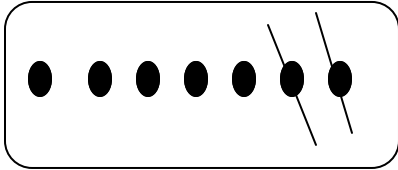




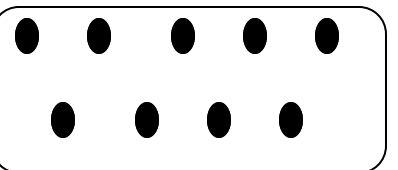


$$\begin{array}{r} 3 \\ - 2 \\ \hline 1 \\ \hline \end{array}$$









Cross out 2 to subtract 2.

3 subtract 2 is 1

Cross out dots to do these.

$\begin{array}{r} 7 \\ - 2 \\ \hline \\ \hline \end{array}$ 	$\begin{array}{r} 8 \\ - 2 \\ \hline \\ \hline \end{array}$ 
$\begin{array}{r} 6 \\ - 3 \\ \hline \\ \hline \end{array}$ 	$\begin{array}{r} 8 \\ - 0 \\ \hline \\ \hline \end{array}$ 
$\begin{array}{r} 5 \\ - 1 \\ \hline \\ \hline \end{array}$ 	$\begin{array}{r} 9 \\ - 5 \\ \hline \\ \hline \end{array}$ 

Draw dots and do these.

$\begin{array}{r} 9 \\ - 2 \\ \hline \\ \hline \end{array}$		$\begin{array}{r} 6 \\ - 4 \\ \hline \\ \hline \end{array}$	
$\begin{array}{r} 7 \\ - 3 \\ \hline \\ \hline \end{array}$		$\begin{array}{r} 8 \\ - 1 \\ \hline \\ \hline \end{array}$	
$\begin{array}{r} 7 \\ - 6 \\ \hline \\ \hline \end{array}$		$\begin{array}{r} 5 \\ - 5 \\ \hline \\ \hline \end{array}$	
$\begin{array}{r} 8 \\ - 6 \\ \hline \\ \hline \end{array}$		$\begin{array}{r} 7 \\ - 0 \\ \hline \\ \hline \end{array}$	


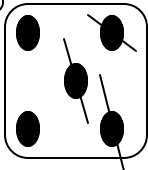
## Subtracting horizontally

We can do this with marbles or dots.







$5 - 3 = \boxed{2}$

Make 5 dots and cross out 3.









5 subtract 3 equals 2

Cross out dots to do these.





$4 - 1 = \square$ 	$3 - 2 = \square$ 
$7 - 3 = \square$ 	$8 - 4 = \square$ 
$10 - 6 = \square$ 	$9 - 5 = \square$ 

Draw dots and do these.



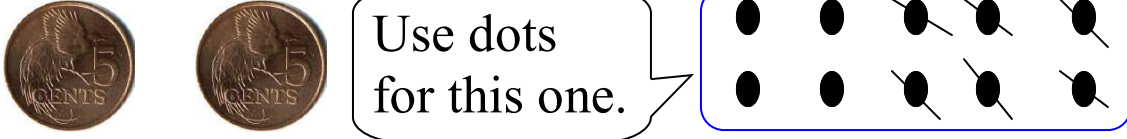
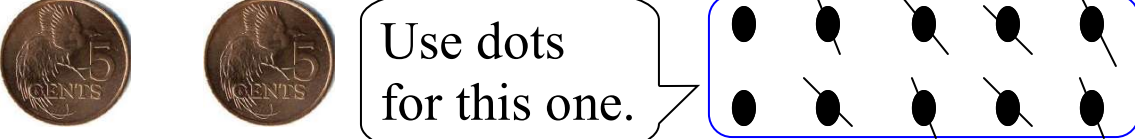
$8 - 3 = \square$ 	$6 - 4 = \square$ 
$5 - 1 = \square$ 	$5 - 4 = \square$ 
$9 - 8 = \square$ 	$8 - 8 = \square$ 
$10 - 10 = \square$ 	$6 - 3 = \square$ 




## Subtraction with money

				
<b>10 cents</b>	-	<b>6 cents</b>	=	<b>4 cents</b>
<b>10 ¢</b>	-	<b>6 ¢</b>	=	<b>4 ¢</b>
				
<b>10 cents</b>	-	<b>4 cents</b>	=	<b>6 cents</b>
<b>10 ¢</b>	-	<b>4 ¢</b>	=	<b>6 ¢</b>
				
<b>9 dollars</b>	-	<b>4 dollars</b>	=	<b>5 dollars</b>
<b>\$ 9</b>	-	<b>\$ 4</b>	=	<b>\$ 5</b>
				
<b>10 dollars</b>	-	<b>5 dollars</b>	=	<b>5 dollars</b>
<b>\$ 10</b>	-	<b>\$ 5</b>	=	<b>\$ 5</b>


Complete the boxes.

	<table border="1" style="width: 100%; border-collapse: collapse;"> <tr> <td style="width: 25%; text-align: center;"><b>cents</b></td> <td style="width: 10%; text-align: center;">-</td> <td style="width: 25%; text-align: center;"><b>cents</b></td> <td style="width: 10%; text-align: center;">=</td> <td style="width: 30%; text-align: center;"><b>cents</b></td> </tr> <tr> <td style="text-align: center;">¢</td> <td style="text-align: center;">-</td> <td style="text-align: center;">¢</td> <td style="text-align: center;">=</td> <td style="text-align: center;">¢</td> </tr> </table>	<b>cents</b>	-	<b>cents</b>	=	<b>cents</b>	¢	-	¢	=	¢
<b>cents</b>	-	<b>cents</b>	=	<b>cents</b>							
¢	-	¢	=	¢							
	<table border="1" style="width: 100%; border-collapse: collapse;"> <tr> <td style="width: 25%; text-align: center;"><b>cents</b></td> <td style="width: 10%; text-align: center;">-</td> <td style="width: 25%; text-align: center;"><b>cents</b></td> <td style="width: 10%; text-align: center;">=</td> <td style="width: 30%; text-align: center;"><b>cents</b></td> </tr> <tr> <td style="text-align: center;">¢</td> <td style="text-align: center;">-</td> <td style="text-align: center;">¢</td> <td style="text-align: center;">=</td> <td style="text-align: center;">¢</td> </tr> </table>	<b>cents</b>	-	<b>cents</b>	=	<b>cents</b>	¢	-	¢	=	¢
<b>cents</b>	-	<b>cents</b>	=	<b>cents</b>							
¢	-	¢	=	¢							
	<table border="1" style="width: 100%; border-collapse: collapse;"> <tr> <td style="width: 25%; text-align: center;"><b>cents</b></td> <td style="width: 10%; text-align: center;">-</td> <td style="width: 25%; text-align: center;"><b>6 cents</b></td> <td style="width: 10%; text-align: center;">=</td> <td style="width: 30%; text-align: center;"><b>cents</b></td> </tr> <tr> <td style="text-align: center;">¢</td> <td style="text-align: center;">-</td> <td style="text-align: center;">¢</td> <td style="text-align: center;">=</td> <td style="text-align: center;">¢</td> </tr> </table>	<b>cents</b>	-	<b>6 cents</b>	=	<b>cents</b>	¢	-	¢	=	¢
<b>cents</b>	-	<b>6 cents</b>	=	<b>cents</b>							
¢	-	¢	=	¢							
	<table border="1" style="width: 100%; border-collapse: collapse;"> <tr> <td style="width: 25%; text-align: center;"><b>cents</b></td> <td style="width: 10%; text-align: center;">-</td> <td style="width: 25%; text-align: center;"><b>8 cents</b></td> <td style="width: 10%; text-align: center;">=</td> <td style="width: 30%; text-align: center;"><b>cents</b></td> </tr> <tr> <td style="text-align: center;"><b>cents</b></td> <td style="text-align: center;">-</td> <td style="text-align: center;">¢</td> <td style="text-align: center;">=</td> <td style="text-align: center;">¢</td> </tr> </table>	<b>cents</b>	-	<b>8 cents</b>	=	<b>cents</b>	<b>cents</b>	-	¢	=	¢
<b>cents</b>	-	<b>8 cents</b>	=	<b>cents</b>							
<b>cents</b>	-	¢	=	¢							


Complete the boxes.

				
<b>dollars</b>	-	<b>dollars</b>	=	<b>dollars</b>
\$	-	\$	=	\$


  

				
<b>dollars</b>	-	<b>dollars</b>	=	<b>dollars</b>
\$	-	\$	=	\$

				
<b>dollars</b>	-	<b>dollars</b>	=	<b>dollars</b>
\$	-	\$	=	\$

				
<b>dollars</b>	-	<b>dollars</b>	=	<b>dollars</b>
\$	-	\$	=	\$

## Number stories


### Garbage

Five empty milk packs.  
Joel puts them in the bin.  
Now there is none.



### Sharing

Joel has two mangoes.  
He **gives** Faith one mango.  
He is **left** with \_\_\_\_\_ mango.



Thank  
you  
Joel.



Mummy has four pears.  
She **gives** Joel one.  
She **gives** Faith one.  
She **gives** daddy one.  
She **remains** with \_\_\_\_\_.



Joel



Faith



Daddy



Mummy

### Subtracting



I have \$3



I **subtract** \$2.  
Now I have \$1.




## Mental Mathematics

Using the number line instead of dots and marbles

We can use the number line to add or subtract.


0	1	2	3	4	5	6	7	8	9	10
---	---	---	---	---	---	---	---	---	---	----


← backward
Add means to go **forward**.  
Subtract means to go **backward**.
→ forward

---

$3 + 1$


0	1	2	3	4	5	6	7	8	9	10
---	---	---	---	---	---	---	---	---	---	----


Start by 3. Add 1 means to go 1 place **forward**.
= 4

---

$2 + 5$


0	1	2	3	4	5	6	7	8	9	10
---	---	---	---	---	---	---	---	---	---	----


Start by 2. Add 5 means to go 5 places **forward**.
= 7

---

$9 - 6$

0	1	2	3	4	5	6	7	8	9	10
---	---	---	---	---	---	---	---	---	---	----


Start by 9. Subtract 6 means to go 6 places **backward**.
= 3

Do these.

$2 + 8$



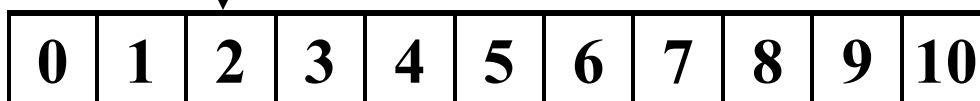
Start by 2. Add 8 means to go 8 places **forward**.

$8 - 2$



Start by 8. Subtract 2 means to go 2 places **backward**.

$2 + 6$



Start by 2. Add 6 means to go 6 places **forward**.

$6 - 2$



Start by 6. Subtract 2 means to go 2 places **backward**.

Do these.

$4 + 4$



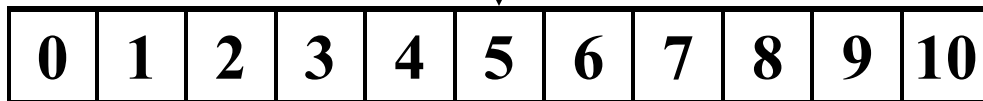
$=$

$4 - 4$



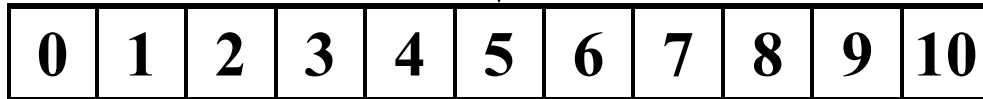
$=$

$5 + 5$




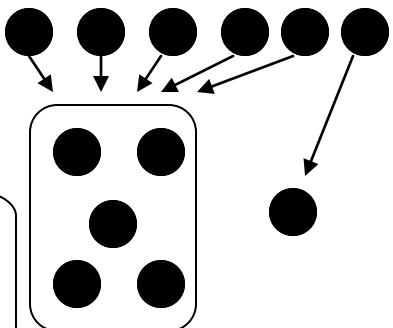

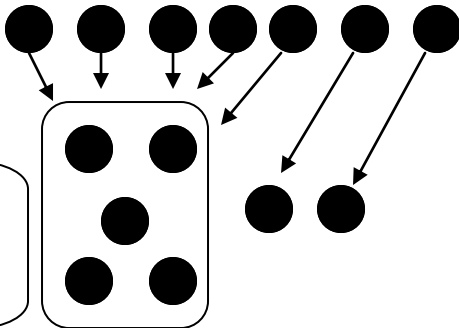
$=$

$5 - 5$

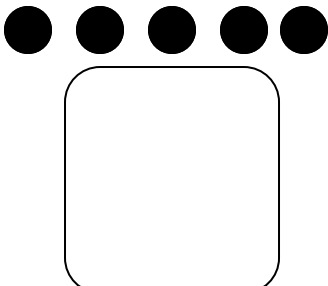
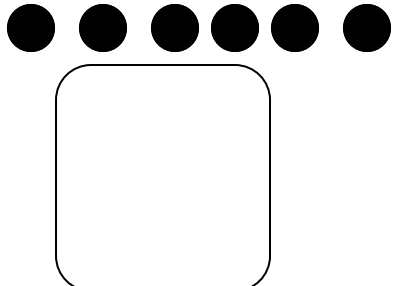


$=$

## Groups of five for easier addition

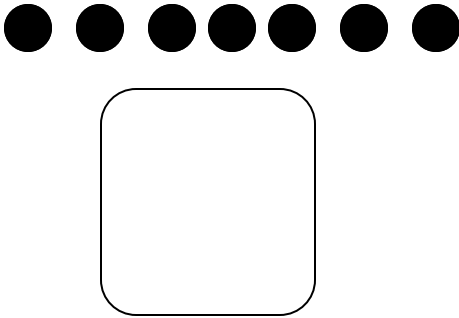
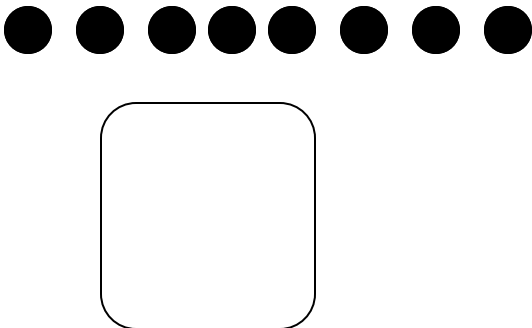
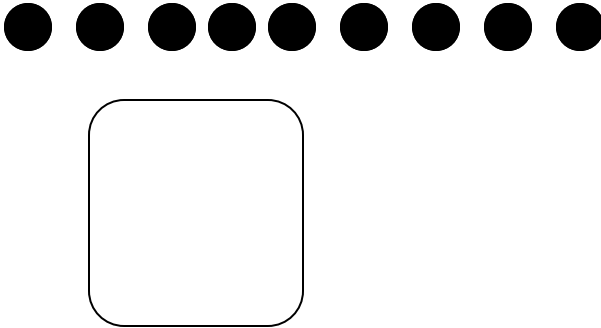
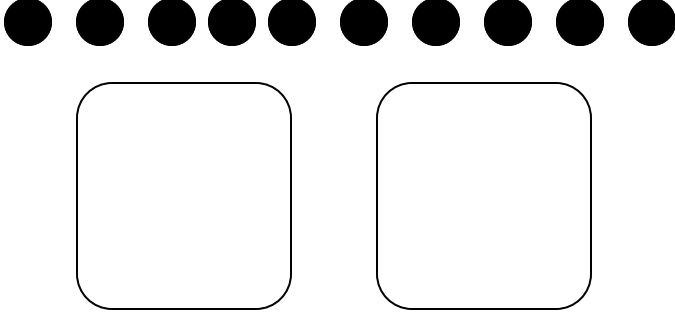
<p>How many do I have?</p>  <p>Make a group of 5.</p>		<div style="border: 1px solid black; padding: 5px; display: inline-block;"> <math>5 + 1 = 6</math> </div>
<p>How many do I have?</p>  <p>Make a group of 5.</p>		<div style="border: 1px solid black; padding: 5px; display: inline-block;"> <math>5 + 2 = 7</math> </div>

Do these.

	<div style="border: 1px solid black; padding: 10px; display: inline-block;"> <math>+ =</math> </div>
	<div style="border: 1px solid black; padding: 10px; display: inline-block;"> <math>+ =</math> </div>




Do these.

	$+$ $=$
	$+$ $=$
	$+$ $=$
	$+$ $=$

# VOCABULARY FOR NUMBERS


same



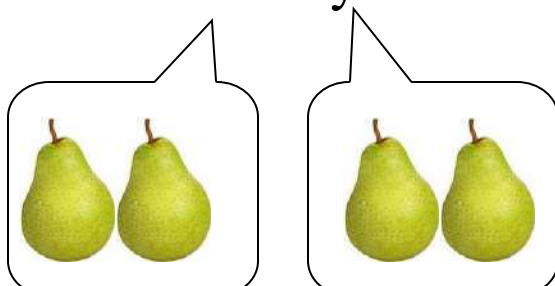
different




equal




as many as




more than/less than



less than/more than



one 1




two 2



three 3




four 4



five 5



six 6




seven 7




eight 8



nine 9



ten 10



join




Joel joins Faith to watch TV. Now there is 2.



2


altogether




1    2    3    4

There is 4 **altogether**.

add




add




1    add    2

1 add 2 is 3


take away



take away



is




2 take away 1 is 1

$2 - 1 = 1$


left

I have




I shared with Faith, mummy and daddy.

I am **left** with




remain

I have





I shared with Faith, mummy and daddy.


I **remain** with



guess

Guess how many 

 3

 No I have 2

before

1, 2

I am **before.**

I am **after.**

after

7, 8

I am **before.**

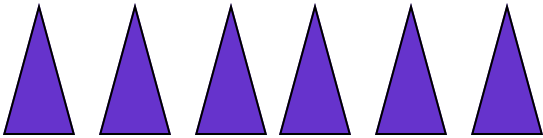
I am **after.**

between


I am **between** Faith and mummy.




repeating unit




This is a pattern of triangles. The **repeating unit** is a triangle.



repeating unit



This is a pattern of milk boxes. The **repeating unit** is a box.





buy



Mummy **buys** fruits at the market.

sells



The lady **sells** carrots.

spends





Mummy **spends** money at the grocery.


how much



How **much** do I have?




More than me


some




I have **some** apples.



few





I have **few** apples.





many

I have **many** apples.



more

I have **more** apples.



most

I have the **most** apples.

least



I have the **least** number of apples.

Number 9



number

Number 3

count


1, 2, 3. I have 3 apples.

# GEOMETRY

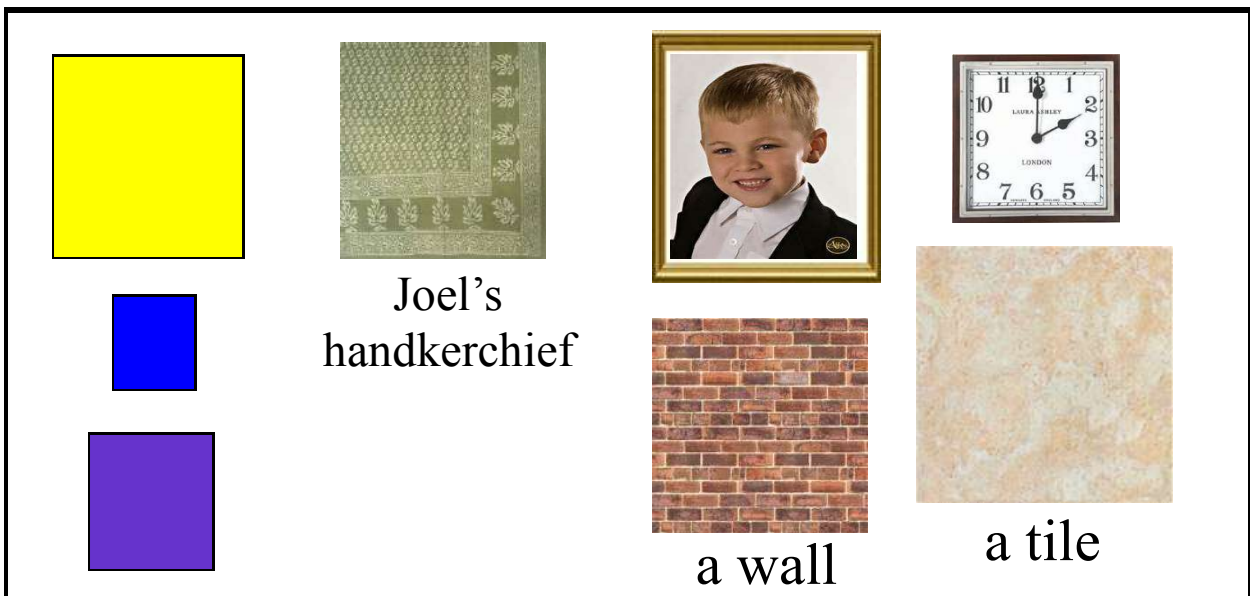
## Plane shapes

Joel says a poem in class.




**ACTIVITY:** The teacher will show students plane shapes and say their names.

These are squares.





These are triangles.




These are rectangles.





These are circles









Write **s** next to the squares





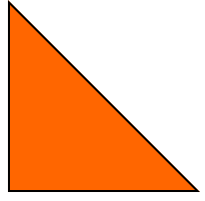
Write **t** next to the triangles.



Write **r** next to the rectangles.




Write **c** next to the circles.




## Properties of plane shapes


These shapes are flat (plane).




square



triangle

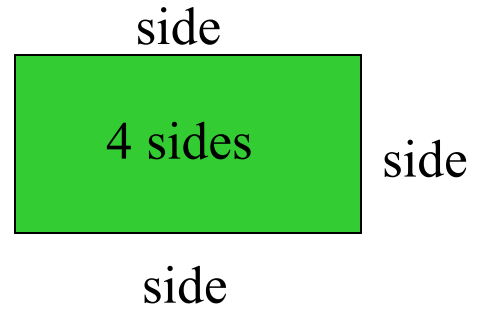
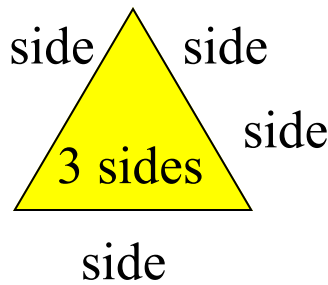
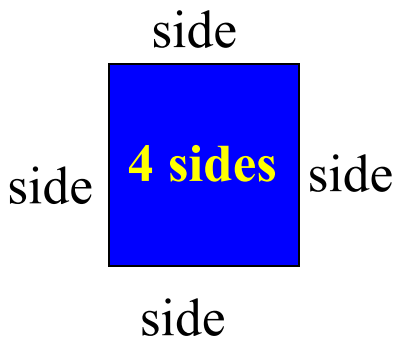


rectangle

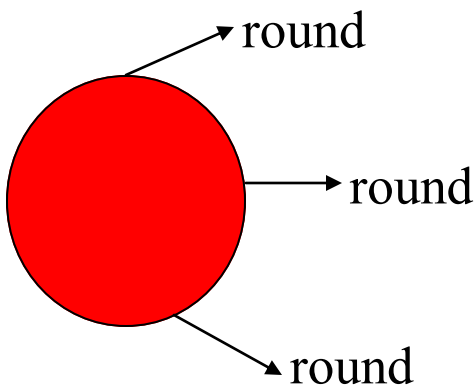


circle

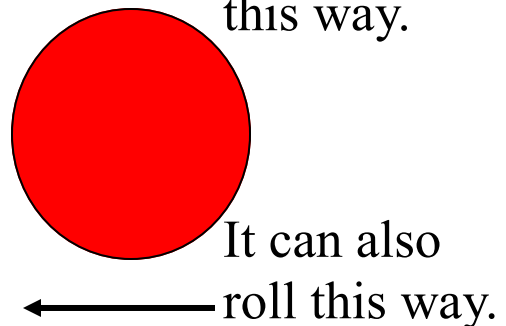
These shapes have straight sides.



This shape is round. It can roll.



→ It can roll this way.



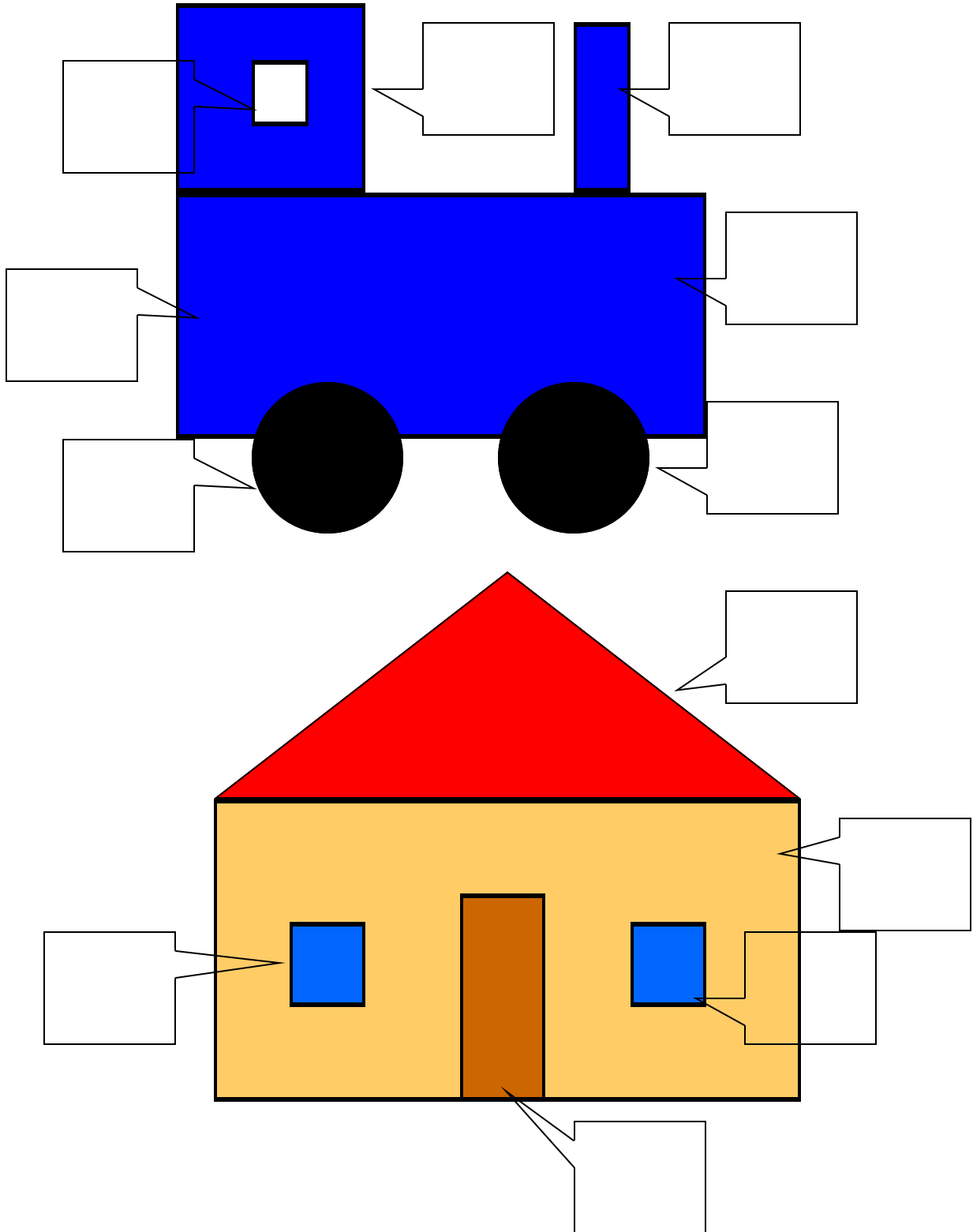
## Models with plane shapes

Write **s** for square, **t** for triangle, **r** for rectangle and **c** for circle.

The image contains several objects with lines pointing to empty boxes for labeling:

- Bicycle:** Lines point to the wheels, handlebars, seat, and frame.
- Speaker:** Lines point to the two circular drivers and the rectangular cabinet.
- Traffic Light:** Lines point to the three colored circles (red, yellow, green) and the rectangular housing.
- Boat:** Lines point to the yellow hull, the blue rectangular cabin, the cyan triangular sail, and the yellow triangular prow.
- Warning Sign:** Lines point to the triangular border and the circular symbol inside.

Write **s** for square, **t** for triangle, **r** for rectangle and **c** for circle.



## Solids

These are boxes.



These are also boxes.



These are balls.



These are cans.

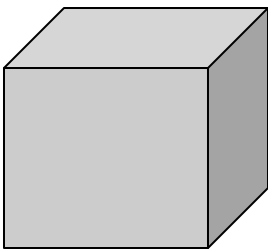


These are cones.



Special names for solids.


This is a cube.



These are cubes.



This is a cuboid.



These are cuboids.



This is a sphere.

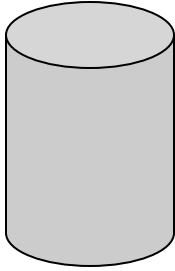


These are spheres.





This is a cylinder.



These are cylinders.




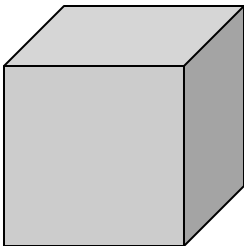
This is a cone.





These are cones.



Write **c** next to the cubes.



Write **c** next to the cuboids.



Write **s** next to the spheres.



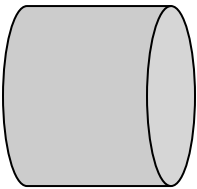









Write **c** next to the cylinders.
















Write **c** next to the cones.





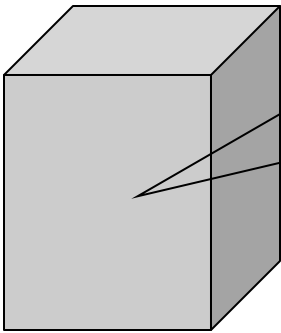
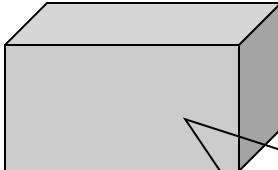









## Properties of solids

**ACTIVITY:** The teacher will show students solids and talk about their properties.

<p>cube</p> 	<p>This is my face. It is flat.</p>	<p>I have 6 faces. All my faces are squares. They are the same size. My sides are straight. I am not round. I cannot roll.</p>
<p>cuboid</p> 	<p>I have 6 faces. They are all flat. My sides are straight. I am not round. I cannot roll.</p>	 <p>If I stand on this face, I still cannot roll.</p>
<p>sphere</p> 	<p>I am round, so I can roll. I am not flat. I am not pointed. I do not have straight sides.</p>	 <p>We are also round.</p>

**cylinder**

My top is flat and round. My top is a circle.

My side is round.

When I lie like this, I can roll.

**cone**

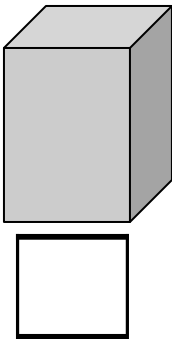
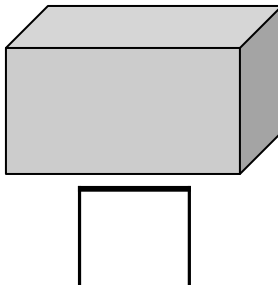
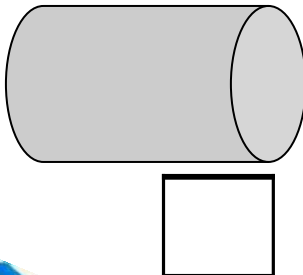
This side is pointed



This side is flat. It is a circle.

My side is round. It is not flat.

When I lie like this, I can roll.


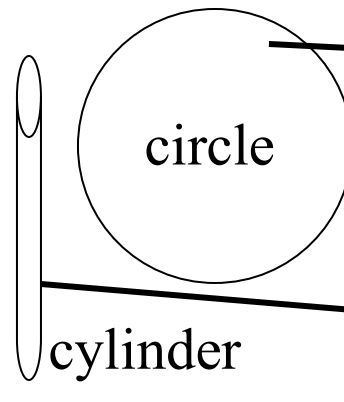
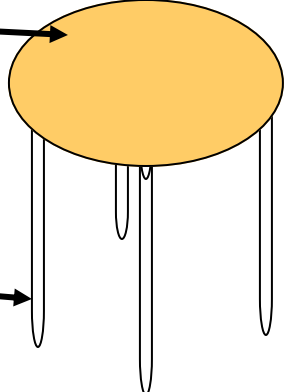

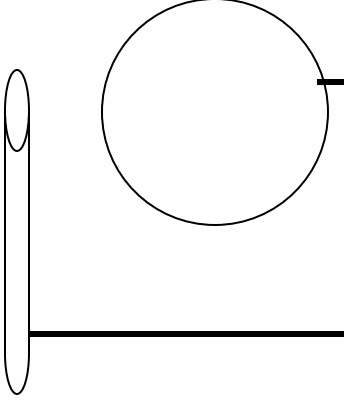
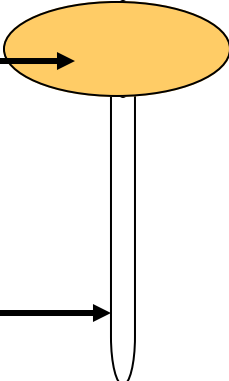

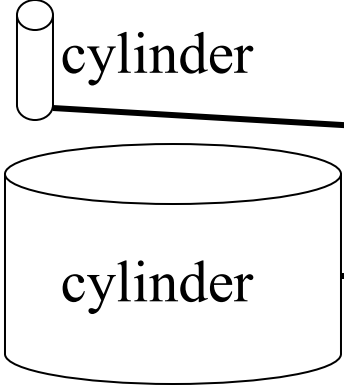
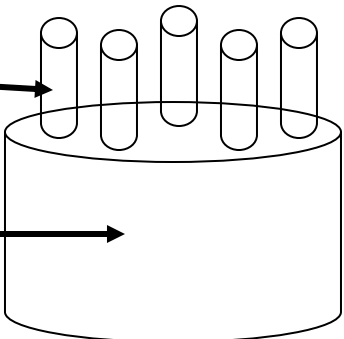
Write **r** next to the solids that can roll.


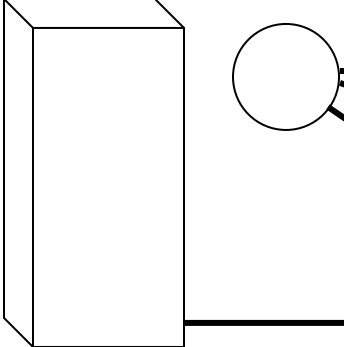
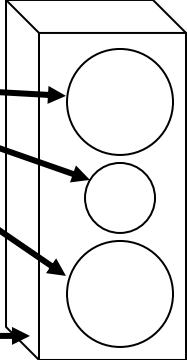

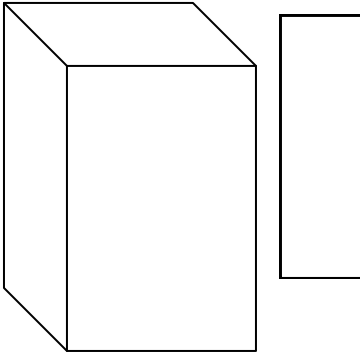
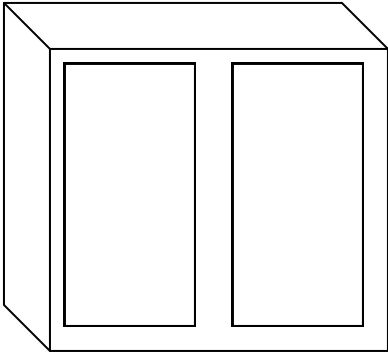

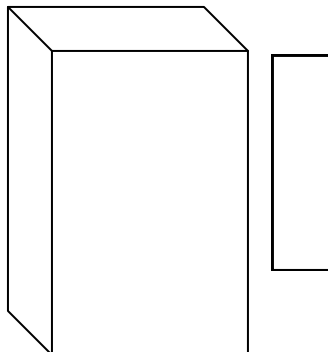
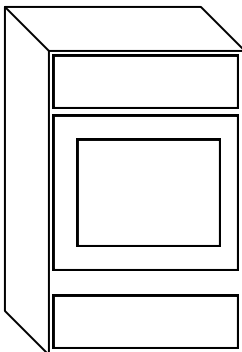

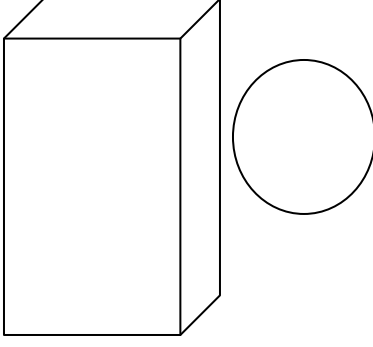
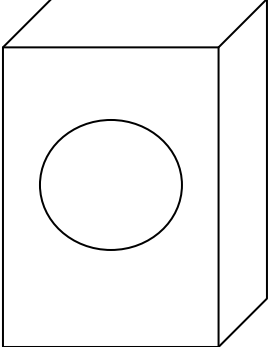



## Models with solids


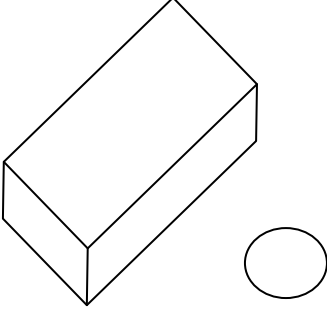
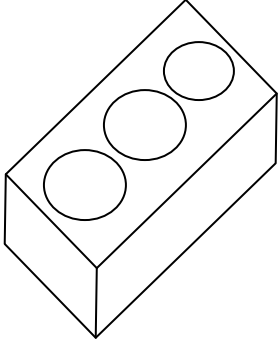




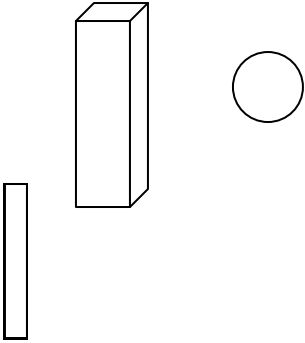
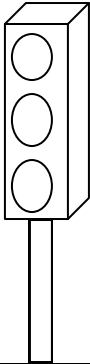

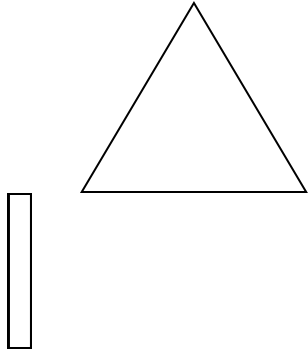
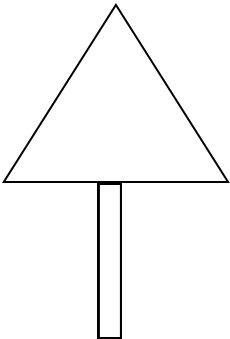
**ACTIVITY:** The teacher will show students solids and how to make models.

objects	shapes	models
		
		
		

Draw lines from the shapes to the model.

objects	shapes	models
		
		
		
		

Draw lines from the shapes to the model.


objects	shapes	models
		
		
		
		

## 2-D and 3-D shapes


ACTIVITY: The teacher will show the class 2-D and 3-D shapes.

### 2-D shapes


These shapes are flat. Remember Joel's poem.




square



triangle



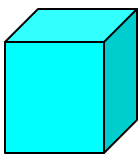
rectangle




circle

### 3-D shapes

These shapes are solids.



cube



cuboid



sphere



cone

These cannot roll. They are not round.










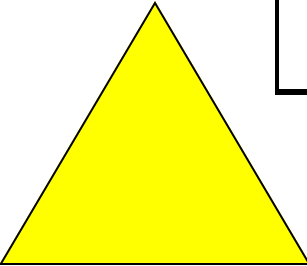







cylinder

These shapes can roll. The cone and cylinder can roll when they lie like this.

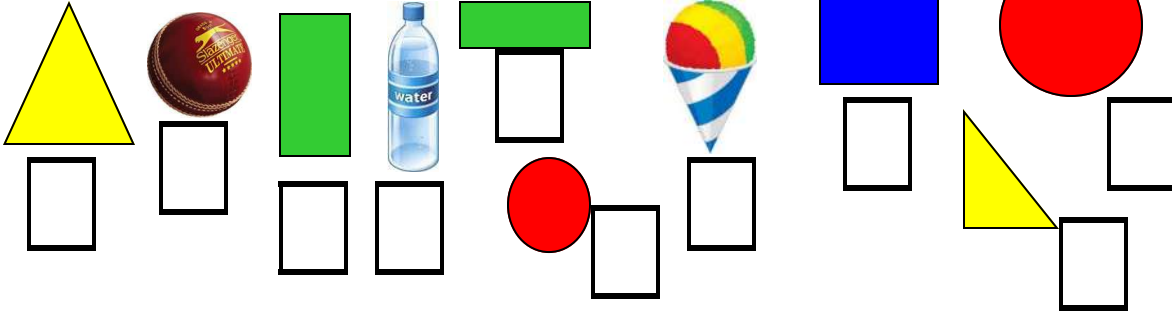


Write **2 D** next to the plane shapes and **3 D** next to the solids.


			
<input type="checkbox"/>	<input type="checkbox"/>	<input type="checkbox"/>	<input type="checkbox" value="3-D"/>
			
<input type="checkbox"/>	<input type="checkbox" value="2-D"/>	<input type="checkbox"/>	<input type="checkbox"/>
			
<input type="checkbox"/>	<input type="checkbox"/>	<input type="checkbox"/>	<input type="checkbox"/>
			
		<input type="checkbox"/>	<input type="checkbox"/>
			
		<input type="checkbox"/>	

## Comparing plane shapes

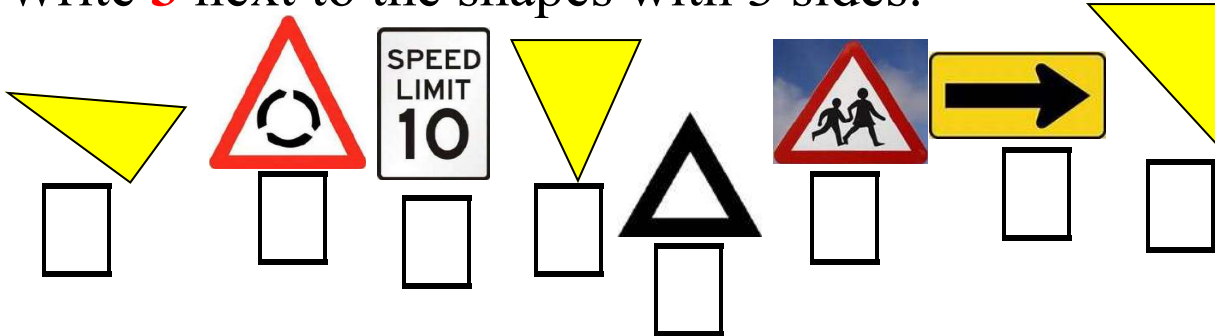
Write **f** next to the flat shapes.



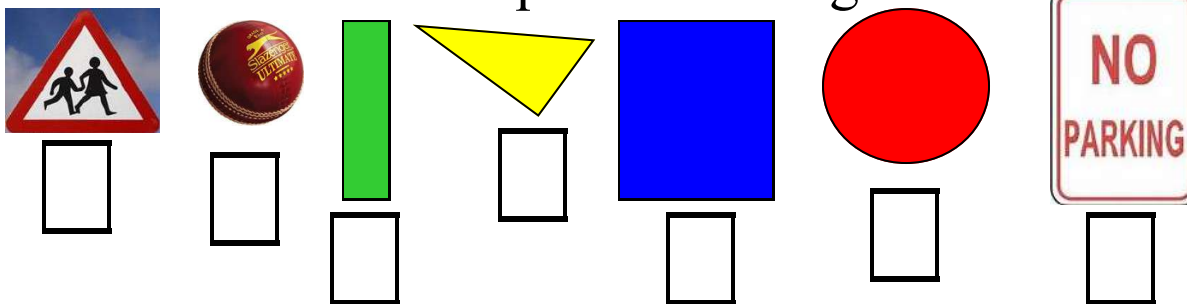
Write **4** next to the shapes with 4 sides



Write **3** next to the shapes with 3 sides.

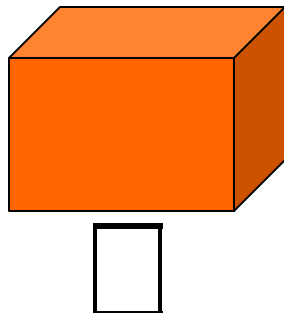

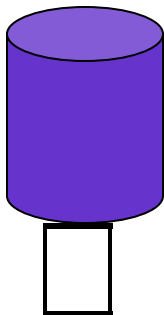


Write **s** next to the shapes with straight sides.

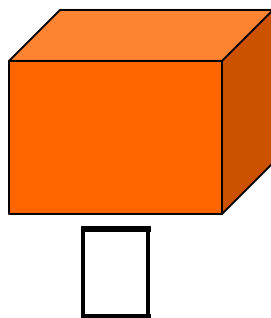

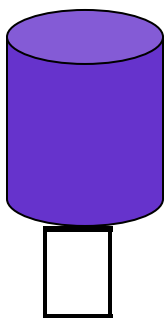


## Comparing solids


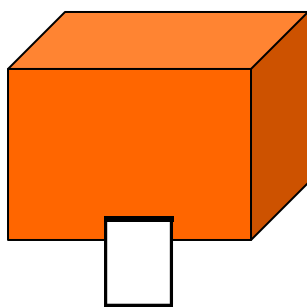

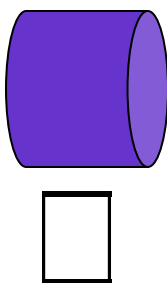
Write **f** next to the solids with a flat side.



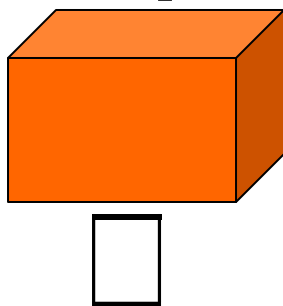

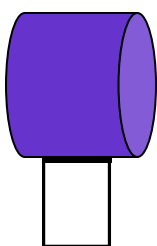
Write **r** next to the solids that are round.



Write **r** next to the solids that can roll.




Write **s** next to the shapes where faces have straight sides.



## Geometrical patterns

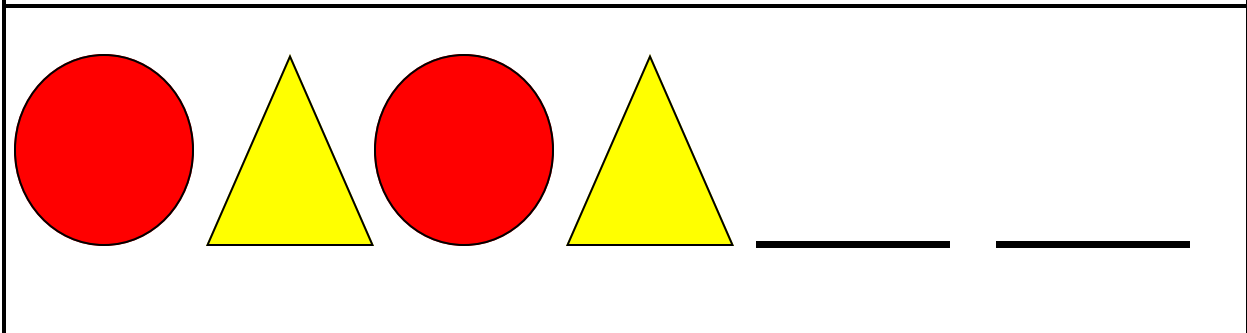
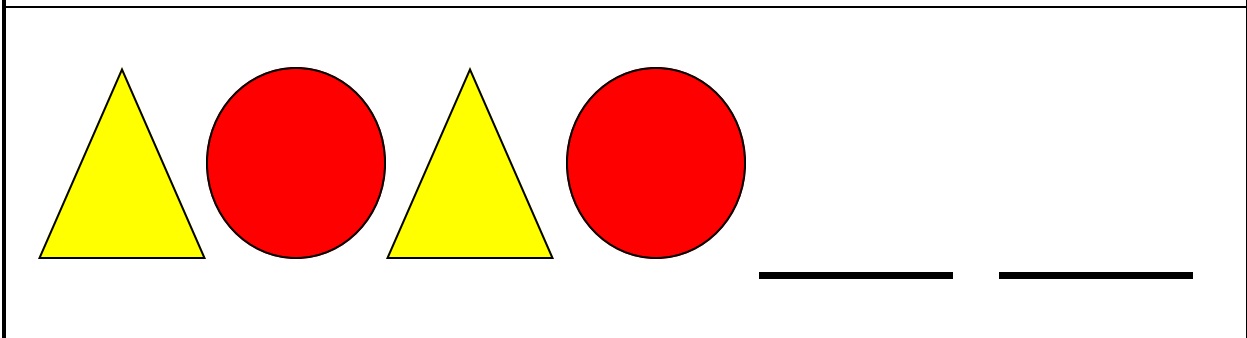
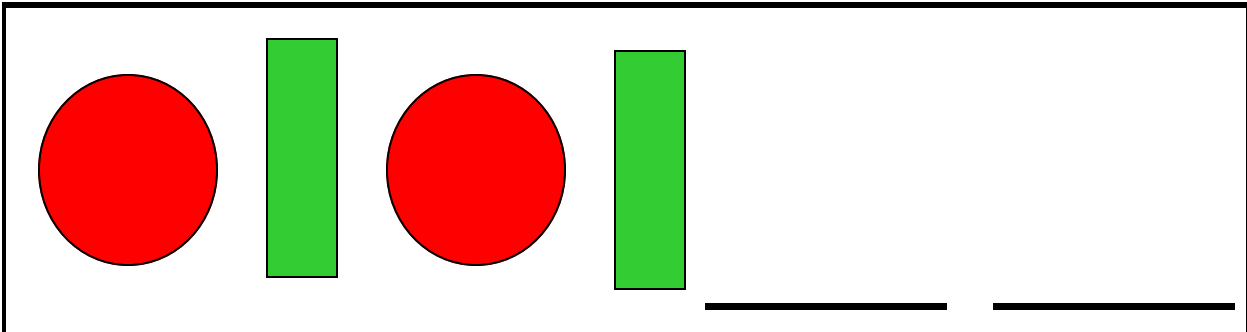
### Patterns with plane shapes

2 shapes pattern

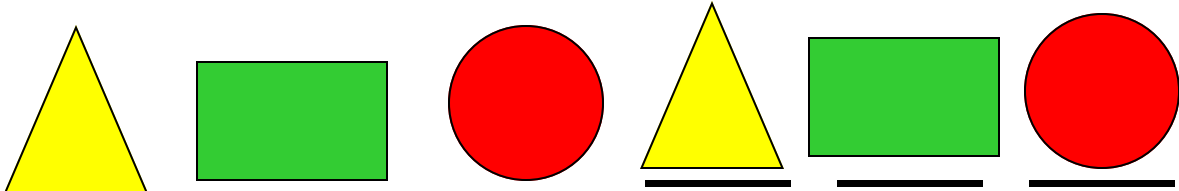


These are the next 2

Draw the next 2 shapes.

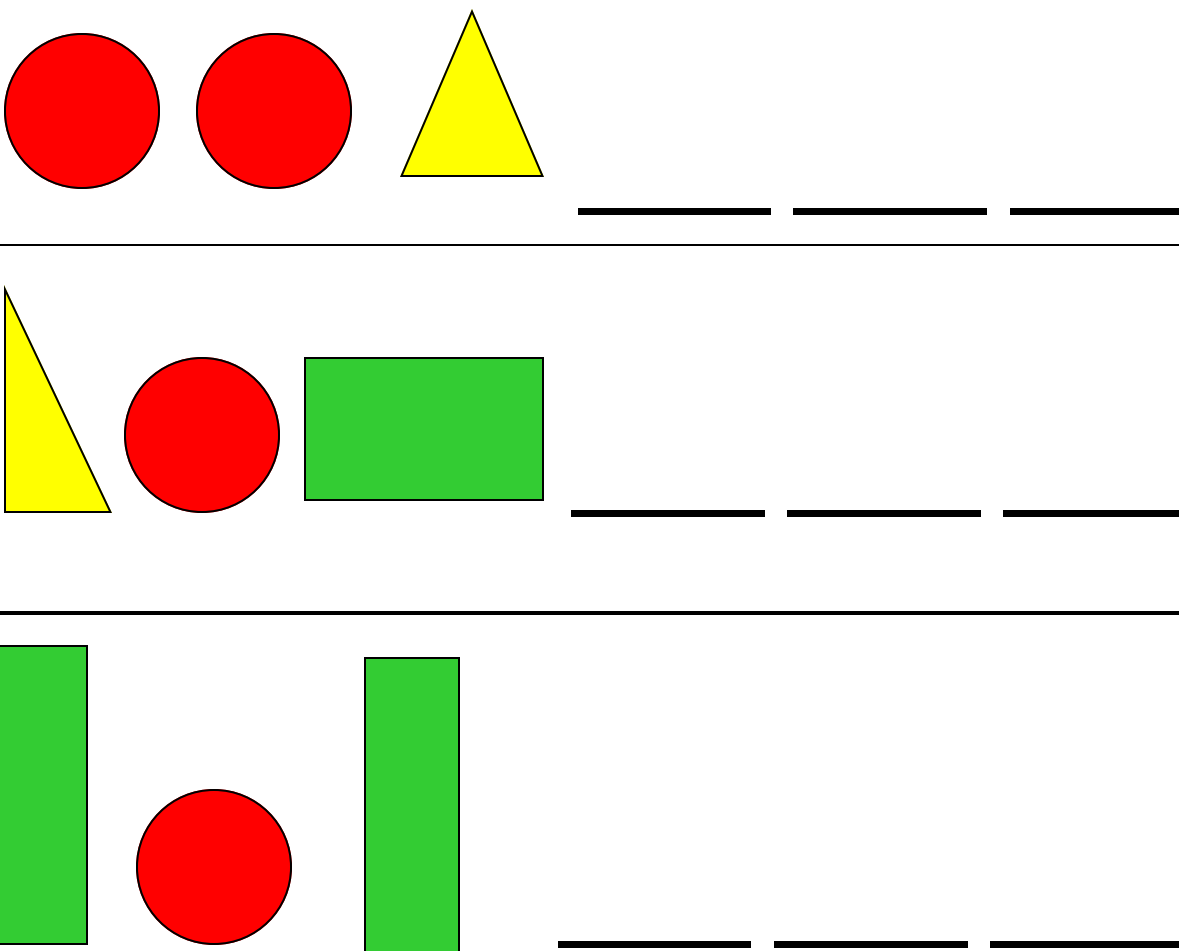


## 3 shapes pattern



These are the next 3 shapes.

Draw the next 3 shapes.



Row 1: Two red circles, one yellow triangle, followed by three dashed lines.

Row 2: One yellow right-angled triangle, one red circle, one green rectangle, followed by three dashed lines.

Row 3: One green vertical rectangle, one red circle, one green vertical rectangle, followed by three dashed lines.

## Patterns with solids

2 solids pattern



These are the next 2 solids

Circle the next two solids.

	<table border="1"> <tr> <td></td> <td></td> </tr> <tr> <td></td> <td></td> </tr> </table>				
	<table border="1"> <tr> <td></td> <td></td> </tr> <tr> <td></td> <td></td> </tr> </table>				
	<table border="1"> <tr> <td></td> <td></td> </tr> <tr> <td></td> <td></td> </tr> </table>				

3 solids pattern



These are the next 3 solids

Circle the next 3 solids.

<p>_____</p>	
<p>_____</p>	
<p>_____</p>	

## VOCABULARY FOR GEOMETRY

ball



can



box



block



cone



flat

These  
tiles are  
**flat**.



not flat



The top of the  
snow cone is  
**not flat**.

round



The ball is  
**round**, so it  
can roll.



size



These do not have the same size.

tall



This water tank is tall.

short



The fridge is tall. The stove is short.

thin



Joel has a thin drinking straw.

thick



The rope is thick.

broad



This piece of wood is thin.

This piece of wood is broad.

big



This gift is big.

small











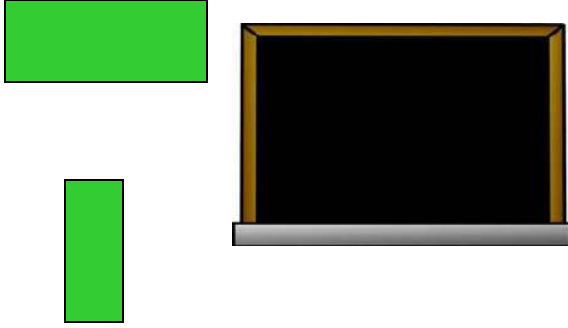







This gift is small.



<p>narrow</p> <p>This stove has a <b>narrow</b> top.</p> 	<p>wide</p> <p>This stove has a <b>wide</b> top.</p> 
<p>on top of</p> 	<p>next to</p> 
<p>over</p> <p>The clouds are <b>over</b> the house.</p> 	<p>between</p> <p>The ball is <b>between</b>.</p> 
<p>underneath</p> <p>The yellow book is <b>underneath</b>.</p> 	<p>above</p> <p>The Sun is <b>above</b>.</p> 

<p>under</p>  <p>The ball is <b>under</b> the table.</p>	<p>up</p>  <p>He is <b>up</b>.</p>
<p>down</p>  <p>He is <b>down</b>.</p>	<p>on</p>  <p>Now the ball is <b>on</b> the table.</p>
<p>beside</p>  <p>The milo is <b>beside</b> the milk. The milk is <b>beside</b> the milo.</p>	<p>in</p>  <p>The ice cream is <b>in</b> the cone.</p>
<p>shape</p>  <p>These solids have different <b>shapes</b>.</p>	<p>pointed</p>  <p>This side of the cone is <b>pointed</b>.</p>

<p>behind</p> <p>The ball is <b>behind</b> the duster.</p> 	<p>in front of</p> <p>The duster is in <b>front</b> of the ball.</p> 
<p>near</p> 	<p>far</p> 
<p>below</p> <p>It is in the <b>below</b> shelf.</p> 	<p>same</p> <p>They are the <b>same</b>.</p> 
<p>squares</p> 	<p>circles</p> 

<p>rectangles</p> 	<p>triangles</p> 
<p>bottom</p>  <p>It is in the <b>bottom</b> shelf.</p>	<p>pattern</p>  <p>My towel has a <b>pattern</b> of roses.</p>
<p>repeat</p>  <p>This is a <b>repeat</b> pattern.</p>	<p>inside</p>  <p>The food is <b>inside</b> the box.</p>
<p>outside</p>  <p>The milo is <b>outside</b> the box.</p>	<p>in the middle</p>  <p>The ice cream is in the <b>middle</b>.</p>

high



higher



low



lower



here



I am here.

there



The ship is there.

far from



I am far from the ship.

close to



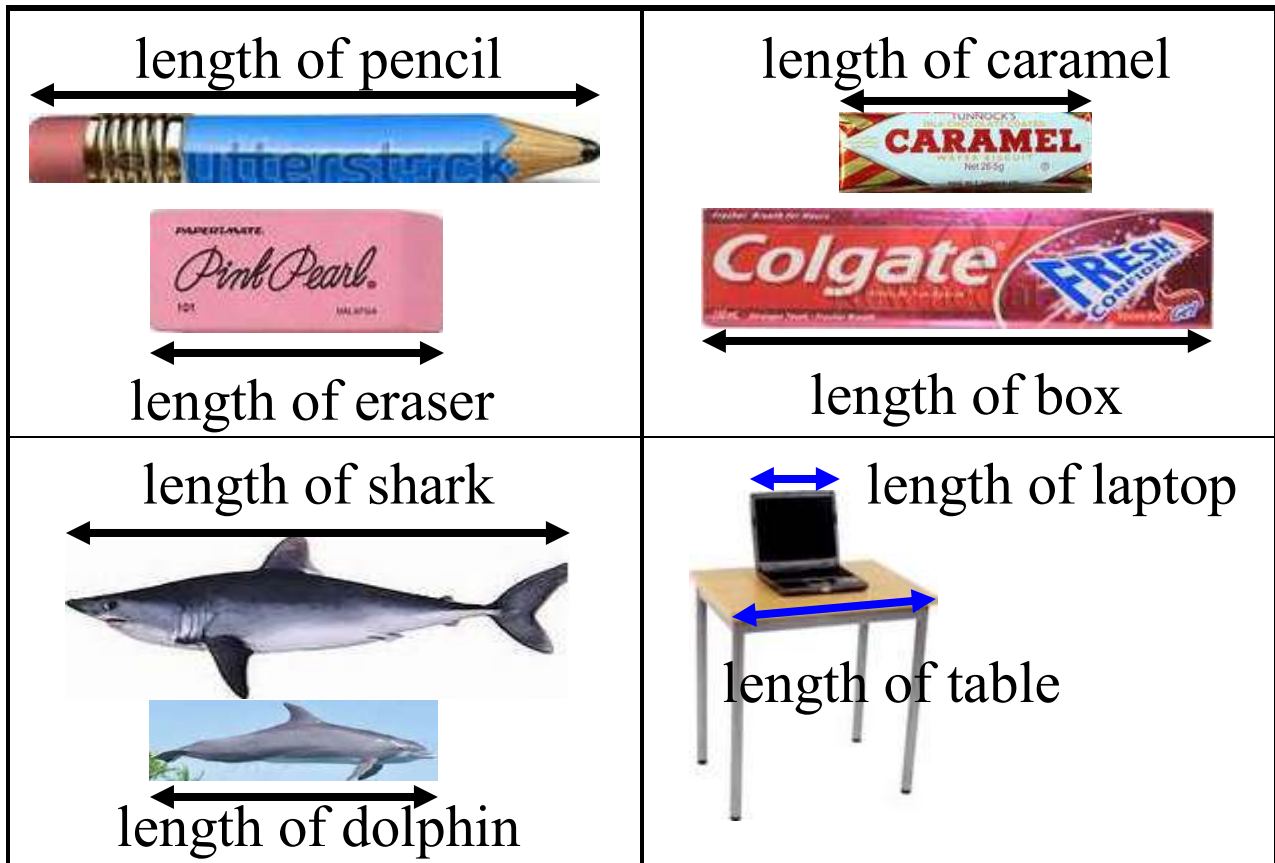
I am close to the shore.

## MEASUREMENT


### Length

Length is from one end to the other end.

ACTIVITY: The teacher will show the class lengths of objects and how to measure these with a ruler.



The length of the pencil is 7 cm.







Write the length of these.













## Long and short

 <p>The shark is long.</p>  <p>The fish is short.</p>	 <p>This umbrella is long.</p>  <p>This umbrella is short.</p>
---	---









Write **l** for long and **s** for short.



## Longer and shorter

 <p>The shark is longer.</p>  <p>The fish is shorter.</p>	 <p>This umbrella is longer.</p>  <p>This umbrella is shorter.</p>
---	---





Write **l** for longer and **s** for shorter.

 <input data-bbox="656 919 777 1073" type="text"/>	 <input data-bbox="1312 919 1430 1073" type="text"/>
 <input data-bbox="524 1205 646 1358" type="text"/>	 <input data-bbox="1227 1192 1349 1346" type="text"/>
 <input data-bbox="656 1430 777 1583" type="text"/>  <input data-bbox="415 1682 537 1835" type="text"/>	 <input data-bbox="1289 1444 1411 1598" type="text"/>  <input data-bbox="1154 1707 1276 1860" type="text"/>





## Short and shorter

 <p>short    shorter</p>	 <p>short    shorter</p>
---	--









Write **s** for short and **r** for shorter.

## Long and longer

 A long piece of wood.  A longer piece of wood.	 long  longer 
--	---









Write **l** for long and **r** for longer.

 <input data-bbox="631 930 755 1083" type="checkbox"/>  <input data-bbox="631 1220 755 1373" type="checkbox"/>	 <input data-bbox="1252 919 1375 1073" type="checkbox"/>  <input data-bbox="1276 1171 1399 1325" type="checkbox"/>
 <input data-bbox="573 1402 696 1556" type="checkbox"/>  <input data-bbox="675 1566 799 1719" type="checkbox"/>	 <input data-bbox="946 1717 1070 1871" type="checkbox"/>  <input data-bbox="1133 1745 1256 1898" type="checkbox"/>



### Tall and taller

<p>tall</p>  <p>taller</p>	<p>tall</p>  <p>taller</p>
---	--

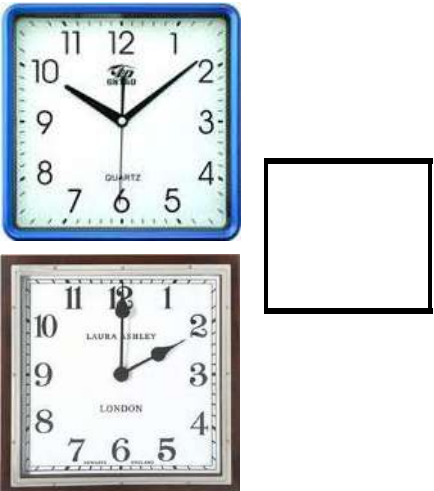



Write **t** for tall and **r** for taller.

 <input data-bbox="284 924 406 1081" type="text"/>  <input data-bbox="657 892 779 1050" type="text"/>	 <input data-bbox="868 1039 990 1197" type="text"/>  <input data-bbox="1128 913 1258 1071" type="text"/>
 <input data-bbox="454 1480 576 1638" type="text"/>  <input data-bbox="657 1512 779 1669" type="text"/>	 <input data-bbox="998 1480 1128 1638" type="text"/>  <input data-bbox="1226 1480 1356 1638" type="text"/>

As long as (same length)

 <p>The green board is <b>as long as</b> the black board.</p>	 <p>The keyboard is <b>as long as</b> the tool box.</p>
--	---

Write **yes** if one is **as long as** the other.



Wide and narrow

	<p>a wide bookcase</p>		<p>a wide floor</p>
	<p>a narrow bookcase</p>		<p>a narrow floor</p>





Write **w** for wide and **n** for narrow.

	<input type="text"/>		<input type="text"/>
	<input type="text"/>		<input type="text"/>
	<input type="text"/>		<input type="text"/>
	<input type="text"/>		<input type="text"/>

Thin and fat

 <p>I am thin      I am fat</p>	 <p>thin</p> <p>fat</p>
--	---

Write **t** for thin and **f** for fat.

 <p><input type="checkbox"/></p> <p><input type="checkbox"/></p>	 <p><input type="checkbox"/></p> <p><input type="checkbox"/></p>
 <p><input type="checkbox"/></p> <p><input type="checkbox"/></p>	 <p><input type="checkbox"/></p> <p><input type="checkbox"/></p>



## Deep and shallow

The boat is in the **deep** water.




The birds are in the **shallow** water.

The ship is in the **deep** water.



The horse is standing in the **shallow** water.








Write **d** for deep and **s** for shallow.



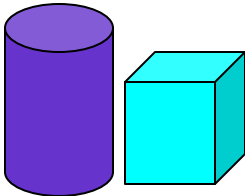

# High and low





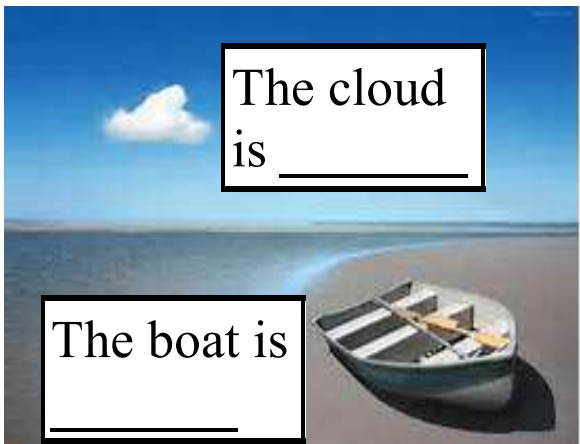

Write **high** or **low** in the boxes.

 <input data-bbox="548 970 808 1073" type="text"/>	 <input data-bbox="1182 995 1446 1098" type="text"/>  <input data-bbox="1192 1255 1435 1358" type="text"/>
 <input data-bbox="526 1482 786 1585" type="text"/>  <input data-bbox="466 1730 704 1833" type="text"/>	 <input data-bbox="1219 1472 1430 1575" type="text"/>  <input data-bbox="992 1766 1230 1869" type="text"/>

## Near and far

 <p>These solids are</p> <div style="border: 1px solid black; padding: 5px; display: inline-block;">near</div>	 <p>These solids are</p> <div style="border: 1px solid black; padding: 5px; display: inline-block;">far</div>
---	---

Write **near** or **far**.

 <div style="border: 1px solid black; width: 150px; height: 40px; margin: 20px auto;"></div>	 <div style="border: 1px solid black; width: 150px; height: 40px; margin: 20px auto;"></div>
 <div style="border: 1px solid black; padding: 5px; display: inline-block; margin: 10px;">         The cloud is _____       </div> <div style="border: 1px solid black; padding: 5px; display: inline-block; margin: 10px;">         The boat is _____       </div>	 <div style="border: 1px solid black; width: 150px; height: 40px; margin: 10px auto;"></div> <div style="border: 1px solid black; width: 150px; height: 40px; margin: 10px auto;"></div>

## Mass

### Light and Heavy

ACTIVITY: The teacher can use a scale to find the mass of individual students at the front of the class. The teacher can show the students that the mass of objects in the class can also be found.

### Light



She is **lifting** the balloons.



She is **pushing** the balloons.



She is **pulling** the balloons.

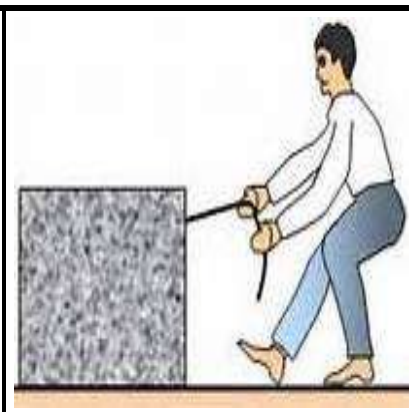
### Heavy



She is trying to **lift** the box.











He is trying to **push** the box.







He is trying to **pull** the box.

 heavy	 light
 light	 heavy









Write **light** or **heavy**.

 <input data-bbox="211 1239 479 1354" type="text"/>	 <input data-bbox="544 1239 812 1354" type="text"/>	 <input data-bbox="868 1239 1136 1354" type="text"/>	 <input data-bbox="1161 1239 1429 1354" type="text"/>
 <input data-bbox="219 1774 487 1890" type="text"/>	 <input data-bbox="519 1774 787 1890" type="text"/>	 <input data-bbox="844 1764 1112 1879" type="text"/>	 <input data-bbox="1144 1764 1412 1879" type="text"/>





## Heavy and heavier

 <p>heavy</p> <p>heavier</p>	 <p>heavy</p> <p>heavier</p>
	









Write **h** for heavy and **r** for heavier.

 <input data-bbox="402 989 558 1094" type="text"/>  <input data-bbox="594 1276 750 1381" type="text"/>	 <input data-bbox="821 1157 977 1262" type="text"/> <input data-bbox="1000 1297 1156 1402" type="text"/> 
 <input data-bbox="212 1654 368 1759" type="text"/>  <input data-bbox="643 1654 799 1759" type="text"/>	 <input data-bbox="833 1646 1005 1751" type="text"/>  <input data-bbox="1162 1787 1318 1892" type="text"/>

# Light and lighter

 <p>light</p>  <p>lighter</p>	 <p>light</p>  <p>lighter</p>
---	--

Write **l** for light and **r** for lighter.

 <input data-bbox="332 1312 487 1417" type="text"/>  <input data-bbox="568 1228 722 1333" type="text"/>	 <input data-bbox="925 1291 1079 1396" type="text"/>  <input data-bbox="1242 1186 1396 1291" type="text"/>
 <input data-bbox="267 1774 430 1879" type="text"/>  <input data-bbox="568 1774 722 1879" type="text"/>	<input data-bbox="893 1501 1047 1606" type="text"/>  <input data-bbox="868 1701 1023 1806" type="text"/> 

Easy to push and hard to push

 <p>easy to push</p>  <p>hard to push</p>	 <p>easy to push</p>  <p>hard to push</p>
---	---

Write **e** for easy to push and **h** for hard to push.



  <p><input type="checkbox"/></p> <p><input type="checkbox"/></p>	  <p><input type="checkbox"/></p> <p><input type="checkbox"/></p>
  <p><input type="checkbox"/></p> <p><input type="checkbox"/></p>	  <p><input type="checkbox"/></p> <p><input type="checkbox"/></p>



Easy to pull and hard to pull

 <p>easy to pull</p>  <p>hard to pull</p>	 <p>easy to pull</p>  <p>hard to pull</p>
---	---

Write **e** for easy to pull and **h** for hard to pull.

  <p><input type="text"/></p> <p><input type="text"/></p>	  <p><input type="text"/></p> <p><input type="text"/></p>
  <p><input type="text"/></p> <p><input type="text"/></p>	  <p><input type="text"/></p>  <p><input type="text"/></p>

## Weight






Both mangoes have the **same weight**.





Both girls have the **same weight**.




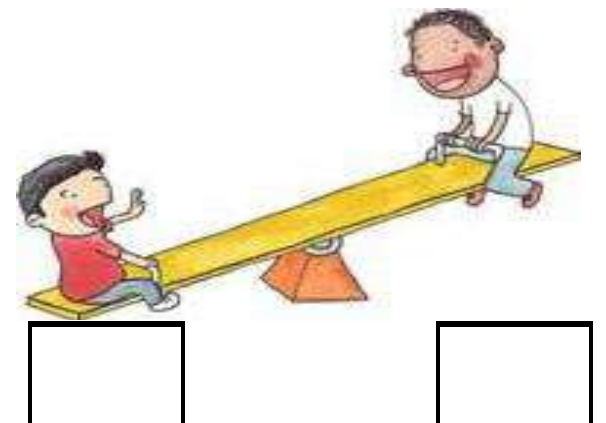
Write **s** for same weight and **d** for different weight.



Light and heavy  
Lighter and heavier

	
<p>heavy or heavier</p> <p>light or lighter</p>	<p>light or lighter</p> <p>heavy or heavier</p>

Write **l** for light/lighter and **h** for heavy/heavier.

 <p><input type="text"/></p> <p><input type="text"/></p>	 <p><input type="text"/></p> <p><input type="text"/></p>
 <p><input type="text"/></p> <p><input type="text"/></p>	 <p><input type="text"/></p> <p><input type="text"/></p>

TIME  
Day and night



Day. It is sunny today.



Night. The moon is out.

Write **d** for day and **n** for night.



## Time of day: sequence of activities



Good morning. She is eating breakfast.



It is lunch time. She is eating lunch in School.



Good afternoon. The students play a game.



Good evening. Joel and his cousin look at TV.



Good night. Joel is sleeping.

Morning comes first.

\_\_\_\_\_

1. Which is second?

\_\_\_\_\_

2. Which is third?

\_\_\_\_\_

3. Which is last?

\_\_\_\_\_

## Early and earlier



Write **e** for early and **r** for earlier.




Write **e** for early and **r** for earlier.




## Late and later



Write **l** for late and **r** for later.



Write **l** for late and **r** for later.



## Short time and long time



He takes a **short time** to drink his milk.




She takes a **long time** to eat her breakfast.

Write **s** for short time and **l** for long time.






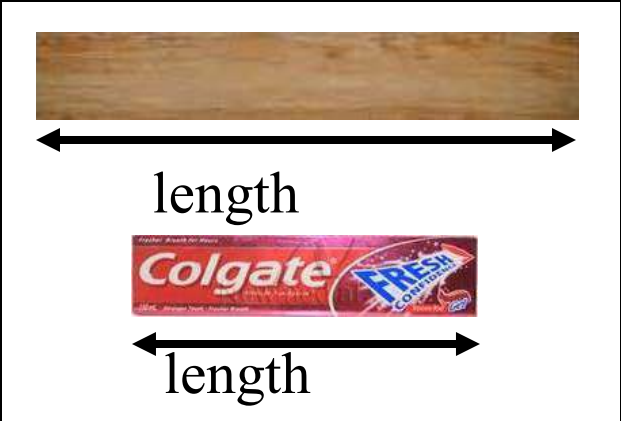
Write **s** for short time and **l** for long time.





# VOCABULARY FOR MEASUREMENT

 <p>short shorter</p>	 <p>long rope</p> <p>longer rope</p>
 <p>tall taller</p>	 <p>same length or as long as</p>
<p>wide river narrow river</p> 	 <p>thin fat</p>
 <p>deep water</p> <p>shallow water</p>	 <p>high</p> <p>low</p>





heavy  
weight

light  
weight




heavy  
weight

light  
weight



light  
weight

heavy  
weight



light  
weight

heavy  
weight



light



lighter

easy to push



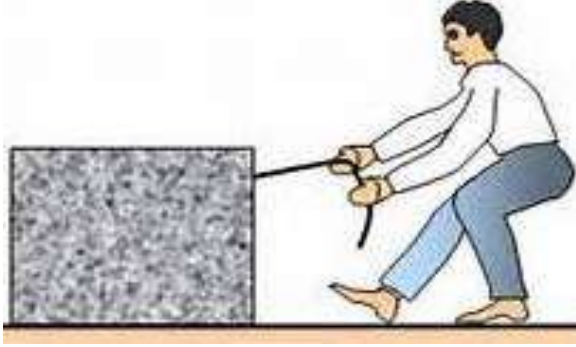
hard to push




easy to pull



hard to pull



time



morning



midday



afternoon



evening



day



night



short time



long time



heavy



light



## STATISTICS

### Sorting and Grouping

**ACTIVITY:** The teacher will call ten students to the front of the class and sort them into groups, e.g. a group of boys, a group of girls, a group with black pencils, a group with short hair, a group with long hair, etc.

Count



**1**



**2**



**3**



**4**



**5**



**6**



**7**



**8**



**9**



**10**

Sort and group



**4 boys**

**1 2 3 4**













**1 2 3 4 5 6**

**6 girls**















1. How many boys? \_\_\_\_\_
2. How many girls? \_\_\_\_\_
3. How many altogether? \_\_\_\_\_
4. More girls than boys. Yes/No
5. Less boys than girls. Yes/No

Put them in a table.

<b>boys</b>	<b>girls</b>
 <b>1</b>	 <b>1</b>
 <b>2</b>	 <b>2</b>
 <b>3</b>	 <b>3</b>
 <b>4</b>	 <b>4</b>
	 <b>5</b>
	 <b>6</b>
<b>4 boys</b>	<b>6 girls</b>


















## Object chart (horizontal with grids)

pens					
pencils					
erasers					
sharpeners					

Objects in class.

1. There are \_\_\_\_\_ pencils.
2. There are \_\_\_\_\_ sharpeners
3. How many pens? \_\_\_\_\_
4. How many erasers? \_\_\_\_\_
5. There are \_\_\_\_\_ pencils and \_\_\_\_\_ sharpeners.



















## Object Chart (vertical with grids)

pens	pencils	erasers	sharpeners
			
			
			
			
			

Objects in class.

1. There are \_\_\_\_\_ pencils.
2. There are \_\_\_\_\_ sharpeners
3. How many pens? \_\_\_\_\_
4. How many erasers? \_\_\_\_\_
5. There are \_\_\_\_\_ pencils and \_\_\_\_\_ sharpeners.













## Picture Chart (horizontal with grids)

bears					
tigers					
rabbits					
birds					
ducks					

Animals at the zoo.

- How many birds? \_\_\_\_\_
- How many ducks? \_\_\_\_\_
- How many bears? \_\_\_\_\_
- There are \_\_\_\_\_ tigers and \_\_\_\_\_ rabbits.
- There are \_\_\_\_\_ birds and \_\_\_\_\_ ducks.
- How many bears and rabbits altogether? \_\_\_\_\_
- How many tigers and rabbits in all? \_\_\_\_\_

## Picture chart (vertical with grids)

cars	buses	bicycles	helicopters	aeroplanes
				
				
				
				

## Transport

1. How many helicopters? \_\_\_\_\_
2. How many buses? \_\_\_\_\_
3. There are \_\_\_\_\_ cars and \_\_\_\_\_ aeroplanes.
4. How many helicopters and aeroplanes altogether?  
\_\_\_\_\_
5. There are two bicycles. Yes/No

## Object Chart (horizontal without grids)

milo



smalta



flour



milk

red  
beans

At the grocery.

1. How many tins of milo? \_\_\_\_\_
2. How many bags of flour? \_\_\_\_\_
3. Four bottles of \_\_\_\_\_.
4. \_\_\_\_\_ tins of red beans.
5. How many bottles of smaltas and packs of milk altogether? \_\_\_\_\_

## Object chart (vertical without grids)

cups

plates

spoons

pots

bowls



In the kitchen.

1. How many plates? \_\_\_\_\_

2. How many cups and plates in all? \_\_\_\_\_

3. \_\_\_\_\_ pots and \_\_\_\_\_ bowls.

4. Add the number of pots and bowls. \_\_\_\_\_

Picture Chart (horizontal without grids)

shirts



ties



belts



skirts



bags



At the clothes store.

1. How many bags did mummy buy? \_\_\_\_\_
2. How many skirts did mummy buy? \_\_\_\_\_
3. Daddy bought \_\_\_\_\_ ties and \_\_\_\_\_ shirts.
4. How many belts did Joel buy? \_\_\_\_\_
5. How many things altogether did they buy? \_\_\_\_\_

## Picture Chart (vertical without grids)

buckets

flags

starfish

boats

lifeguards



At the beach.

1. How many starfish did Joel get? \_\_\_\_\_

2. How many flags did Faith see? \_\_\_\_\_

3. There are \_\_\_\_\_ flags and \_\_\_\_\_ boats.

4. Joel saw \_\_\_\_\_ lifeguards.

5. Joel took \_\_\_\_\_ buckets to collect starfish.



ACTIVITY: The teacher will call 10 students with their bags to the front of the class. He/ she will sort them into groups of bag colours.

Draw the bags in the object chart. Then colour the bags.

Object Chart for bag colours

black				
blue				
red				
yellow				

1. How many black bags? \_\_\_\_\_
2. How many blue bags? \_\_\_\_\_
3. \_\_\_\_\_ red bags and \_\_\_\_\_ yellow bags.
4. How many bags in all? \_\_\_\_\_

ACTIVITY: The teacher will call 10 students with their pencils to the front of the class. He/she will sort them into pencil colours. Then help them complete the chart.

Object Chart for pencil colours.

black				
blue				
yellow				
red				

1. How many black pencils? \_\_\_\_\_
2. How many blue pencils? \_\_\_\_\_
3. \_\_\_\_\_ yellow and \_\_\_\_\_ red pencils.
4. Which colour has more? \_\_\_\_\_
5. Which colour has less? \_\_\_\_\_

# VOCABULARY FOR STATISTICS

**Sort** the groceries



groups



object chart

pencils



sharpeners




picture chart

boys



girls



same



more



more eggs

more than



less than

less



less eggs



fewer



fewer  
cupcakes

many



two bulbs



There are **many** bulbs  
on the tree.

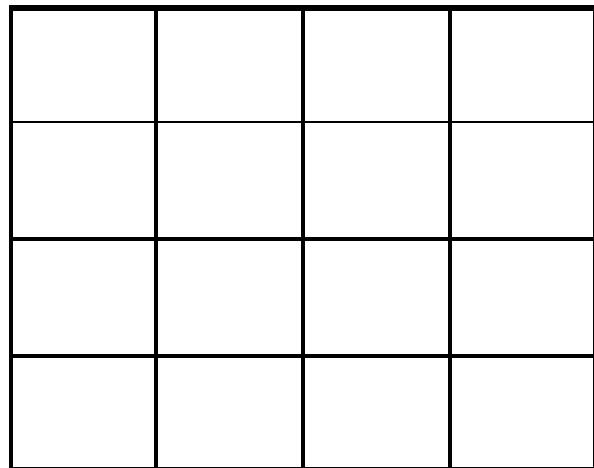
altogether



1 2 3 4 5


5 children **altogether**

grid



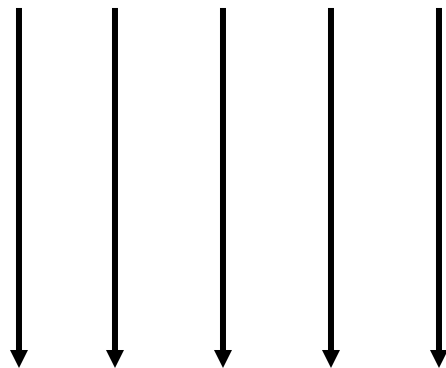
across

These lines go **across**



down

These lines go **down**





This is an authorized free edition from  
[www.obooko.com](http://www.obooko.com)

Although you do not have to pay for this e-book, the author's intellectual property rights remain fully protected by international Copyright law. You are licensed to use this digital copy strictly for your personal enjoyment only: it must not be redistributed commercially or offered for sale in any form. If you paid for this free edition, or to gain access to it, we suggest you demand an immediate refund and report the transaction to the author and obooko.